

Solutionbank C1

Edexcel Modular Mathematics for AS and A-Level

Algebraic fractions

Exercise A, Question 1

Question:

The line L has equation $y = 5 - 2x$.

(a) Show that the point $P(3, -1)$ lies on L .

(b) Find an equation of the line, perpendicular to L , which passes through P . Give your answer in the form $ax + by + c = 0$, where a , b and c are integers.

Solution:

(a)

For $x = 3$,

$$y = 5 - (2 \times 3) = 5 - 6 = -1$$

So $(3, -1)$ lies on L .

Substitute $x = 3$
into the equation of L .
Give a conclusion.

(b)

$$y = -2x + 5$$

Gradient of L is -2 .

Perpendicular to L ,

gradient is $\frac{1}{2}$ (

$$\frac{1}{2} \times -2 = -1)$$

Compare with
 $y = mx + c$ to find
the gradient m
For a perpendicular

line, the gradient

$$\text{is } -\frac{1}{m}$$

Use $y - y_1 = m$

$$y - (-1) = \frac{1}{2}(x - 3)$$

$$(x - x_1)$$

$$y + 1 = \frac{1}{2}x - \frac{3}{2}$$

Multiply by 2

$$2y + 2 = x - 3$$

$$0 = x - 2y - 5$$

$$x - 2y - 5 = 0$$

$$(a = 1, b = -2, c = -5)$$

where a , b and c
are integers.

This is the required
form $ax + by + c = 0$,

Solutionbank C1

Edexcel Modular Mathematics for AS and A-Level

Algebraic fractions

Exercise A, Question 2

Question:

The points A and B have coordinates $(-2, 1)$ and $(5, 2)$ respectively.

(a) Find, in its simplest surd form, the length AB .

(b) Find an equation of the line through A and B , giving your answer in the form $ax + by + c = 0$, where a , b and c are integers.

The line through A and B meets the y -axis at the point C .

(c) Find the coordinates of C .

Solution:

(a)

$A : (-2, 1)$, B
 $(5, 2)$

AB

The distance between

$$= \sqrt{(5 - (-2))^2 + (2 - 1)^2}$$

$$= \sqrt{(7^2 + 1^2)} = \sqrt{50}$$

two points is

$$\sqrt{(x_2 - x_1)^2 + (y_2 - y_1)^2}$$

$$\sqrt{50}$$

AB

Theorem)

$$= \sqrt{(25 \times 2)} = 5\sqrt{2}$$

$$= 5\sqrt{2}$$

(Pythagoras's

Use $\sqrt{(ab)} = \sqrt{a}\sqrt{b}$

(b)

$$m = \frac{2-1}{5 - (-2)} = \frac{1}{7}$$

Find the gradient

of the line, using

$$m = \frac{y_2 - y_1}{x_2 - x_1}$$

$$y - 1 = \frac{1}{7} (x - (-2))$$

$$(x - x_1)$$

Use $y - y_1 = m$

$$y - 1 = \frac{1}{7}x + \frac{2}{7}$$

Multiply by 7

$$7y - 7 = x + 2$$

$$0 = x - 7y + 9$$

$$x - 7y + 9 = 0$$

This is the required form $ax + by + c = 0$,

$$(a = 1, b = -7, c = 9)$$

where a , b and c are integers.

(c)

$$x = 0 :$$

Use $x = 0$ to find

$$0 - 7y + 9 = 0$$

$$9 = 7y$$

where the line meets the y -axis.

$$y = \frac{9}{7} \text{ or } y = 1 \frac{2}{7}$$

$$C \text{ is the point } (0, 1 \frac{2}{7})$$

Solutionbank C1

Edexcel Modular Mathematics for AS and A-Level

Algebraic fractions Exercise A, Question 3

Question:

The line l_1 passes through the point $(9, -4)$ and has gradient $\frac{1}{3}$.

(a) Find an equation for l_1 in the form $ax + by + c = 0$, where a, b and c are integers.

The line l_2 passes through the origin O and has gradient -2 . The lines l_1 and l_2 intersect at the point P .

(b) Calculate the coordinates of P .

Given that l_1 crosses the y -axis at the point C ,

(c) calculate the exact area of $\triangle OCP$.

Solution:

(a)

$$\begin{aligned}
 y - (-4) &= \frac{1}{3}(x - 9) && \text{Use } y - y_1 = m(x - x_1) \\
 y + 4 &= \frac{1}{3}(x - 9) \\
 y + 4 &= \frac{1}{3}x - 3 && \text{Multiply by 3} \\
 3y + 12 &= x - 9 \\
 0 &= x - 3y - 21 \\
 x - 3y - 21 &= 0 && \text{This is the required} \\
 (a = 1, b = -3, c = -21) &&& \text{form } ax + by + c = 0, \text{ where } a, b \text{ and } c \text{ are integers.}
 \end{aligned}$$

(b)

Equation of $l_2 : y = -2x$

The equation of a straight line through the origin

is $y = mx$.

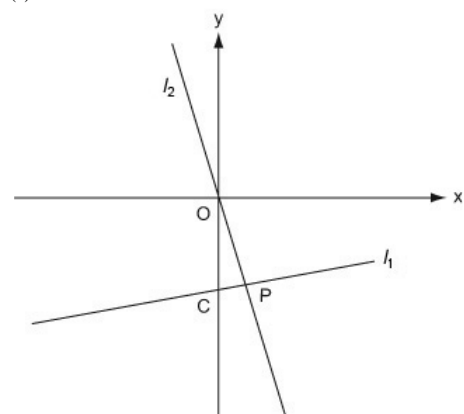
$$\begin{aligned}
 l_1 : x - 3y - 21 &= 0 \\
 x - 3(-2x) - 21 &= 0 \\
 x + 6x - 21 &= 0 \\
 7x &= 21 \\
 x &= 3 \\
 y = -2 \times 3 &= -6
 \end{aligned}$$

Substitute $y = -2x$ into the equation of l_1

Substitute back into $y = -2x$

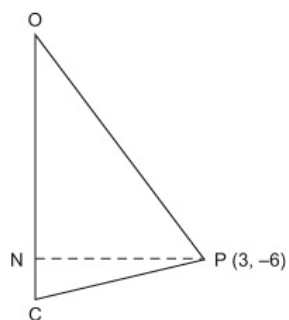
Coordinates of $P :$
 $(3, -6)$

(c)



Use a rough sketch to show the given information

Be careful not to make any wrong assumptions. Here, for example, $\angle OPC$ is *not* 90°



Use OC as the base and PN
as the perpendicular height

Where l_1 meets the y -axis, $x = 0$.

$$0 - 3y - 21 = 0$$

$$3y = -21$$

$$y = -7$$

So OC = 7 and PN = 3

Put $x = 0$ in the
equation of l_1

The distance of P
from the y -axis is
the same as its
 x -coordinate

$$\text{Area of } \triangle OCP = \frac{1}{2} (\text{base} \times \text{height})$$

$$= \frac{1}{2} (7 \times 3)$$

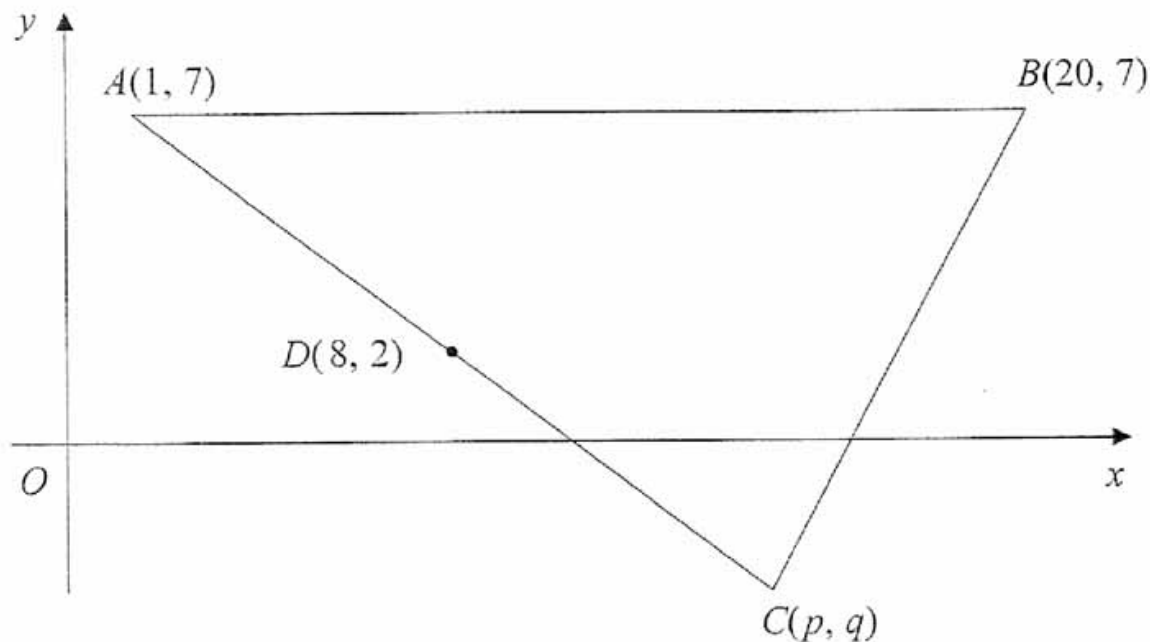
$$= 10 \frac{1}{2}$$

Solutionbank C1

Edexcel Modular Mathematics for AS and A-Level

Algebraic fractions
 Exercise A, Question 4

Question:



The points $A(1, 7)$, $B(20, 7)$ and $C(p, q)$ form the vertices of a triangle ABC , as shown in the figure. The point $D(8, 2)$ is the mid-point of AC .

(a) Find the value of p and the value of q .

The line l , which passes through D and is perpendicular to AC , intersects AB at E .

(b) Find an equation for l , in the form $ax + by + c = 0$, where a , b and c are integers.

(c) Find the exact x -coordinate of E .

Solution:

(a)

$$\left(\frac{1+p}{2}, \frac{7+q}{2} \right) = (8, 2) \qquad \left(\frac{x_1+x_2}{2}, \frac{y_1+y_2}{2} \right)$$

is the mid-point
 of the line from
 (x_1, y_1) to

$$(x_2, y_2)$$

$\frac{1+p}{2}$	$= 8$		Equate the x -
		coordinates	
$1 + p$	$= 16$		
p	$= 15$		
$\frac{7+q}{2}$	$= 2$		Equate the y -
		coordinates	
$7 + q$	$= 4$		
q	$= -3$		

(b)

Gradient of AC :

$$m = \frac{2-7}{8-1} = \frac{-5}{7}$$

Use the points A

and D, with

$$m = \frac{y_2 - y_1}{x_2 - x_1},$$

to find the gradient of AC (or

AD) .

For a perpendicular

Gradient of l is

$$-\frac{1}{\left(\frac{-5}{7}\right)} = \frac{7}{5}$$

gradient

line, the

$$\text{is } -\frac{1}{m}$$

$$y - 2 = \frac{7}{5}(x - 8)$$

line l passes

The

through $D(8, 2)$

. So

use this point in

$$y - y_1 = m$$

$$(x - x_1)$$

$$y - 2 = \frac{7x}{5} - \frac{56}{5}$$

by 5

Multiply

$$5y - 10 = 7x - 56$$

$$0 = 7x - 5y - 46$$

$$7x - 5y - 46 = 0$$

in the

This is

required form

$$ax + by + c = 0,$$

where a, b and c

are integers.

(c)

The equation of AB

$$\text{is } y = 7$$

At E :

Substitute $y = 7$ into

$$7x - (5 \times 7) - 46 = 0$$

of l to

the equation

$$7x - 35 - 46 = 0$$

E.

find the point

$$7x = 81$$

$$x = 11 \frac{4}{7}$$

Solutionbank C1

Edexcel Modular Mathematics for AS and A-Level

Algebraic fractions

Exercise A, Question 5

Question:

The straight line l_1 has equation $y = 3x - 6$.

The straight line l_2 is perpendicular to l_1 and passes through the point $(6, 2)$.

(a) Find an equation for l_2 in the form $y = mx + c$, where m and c are constants.

The lines l_1 and l_2 intersect at the point C .

(b) Use algebra to find the coordinates of C .

The lines l_1 and l_2 cross the x -axis at the point A and B respectively.

(c) Calculate the exact area of triangle ABC .

Solution:

(a)

The gradient
of l_1 is 3.

with $y = mx + c$.

Compare

So the gradient

of l_2 is $-\frac{1}{3}$

For a perpendicular

line, the gradient

is $-\frac{1}{m}$

Eqn. of l_2 :

$$y - 2 = -\frac{1}{3}(x - 6)$$

$(x - x_1)$

Use $y - y_1 = m$

$$y - 2 = -\frac{1}{3}x + 2$$

$$y = -\frac{1}{3}x + 4$$

This is the required

form $y = mx + c$.

(b)

$$y = 3x - 6$$

equations

Solve these

$$y = -\frac{1}{3}x + 4$$

simultaneously

$$3x - 6 = -\frac{1}{3}x + 4$$

$$3x + \frac{1}{3}x = 4 + 6$$

$$\frac{10}{3}x = 10$$

by 3 and

Multiply

$$x = 3$$

divide by 10

$y =$

$$(3 \times 3)$$

$$- 6 = 3$$

Substitute back

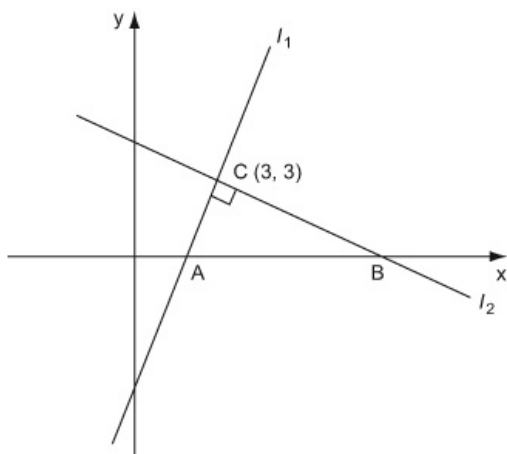
The point

C is

$$(3, 3)$$

into $y = 3x - 6$

(c)



Use a rough sketch to show the given information.

Where l_1 meets the x -axis, $y = 0$:

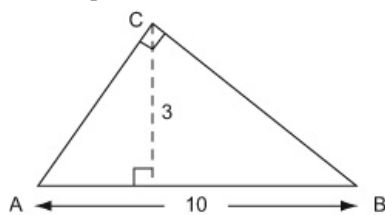
$$\begin{aligned} 0 &= 3x - 6 \\ 3x &= 6 \\ x &= 2 \end{aligned}$$

A is the point $(2, 0)$

Where l_2 meets the x -axis, $y = 0$:

$$\begin{aligned} 0 &= -\frac{1}{3}x + 4 \\ \frac{1}{3}x &= 4 \\ x &= 12 \end{aligned}$$

B is the point $(12, 0)$



$$AB = 10 (12 - 2)$$

The perpendicular height, using AB as the base, is 3

$$\begin{aligned} \text{Area of } \triangle ABC &= \frac{1}{2} (\text{base} \times \text{height}) \\ &= \frac{1}{2} (10 \times 3) \\ &= 15 \end{aligned}$$

Put $y = 0$ to find

where the lines meet the x -axis

Although $\angle C$ is a right-angle, it is easier to use AB as the base.

The distance of C from the x -axis is the same as its y -coordinate.

Solutionbank C1

Edexcel Modular Mathematics for AS and A-Level

Algebraic fractions

Exercise A, Question 6

Question:

The line l_1 has equation $6x - 4y - 5 = 0$.

The line l_2 has equation $x + 2y - 3 = 0$.

(a) Find the coordinates of P , the point of intersection of l_1 and l_2 .

The line l_1 crosses the y -axis at the point M and the line l_2 crosses the y -axis at the point N .

(b) Find the area of $\triangle MNP$.

Solution:

(a)

$$6x - 4y - 5 = 0 \quad (\text{i})$$

$$x + 2y - 3 = 0 \quad (\text{ii})$$

$$x = 3 - 2y \quad \text{equation (ii)}$$

$$6(3 - 2y) - 4y - 5 = 0$$

$$18 - 12y - 4y - 5 = 0$$

$$18 - 5 = 12y + 4y$$

$$16y = 13$$

$$y = \frac{13}{16}$$

$$x = 3 - 2\left(\frac{13}{16}\right) = 3 - \frac{26}{16}$$

$$x = 1\frac{3}{8}$$

P is the point $\left(1\frac{3}{8}, \frac{13}{16}\right)$

(b)

Solve the equations
simultaneously

Find x in terms of y from

Substitute into equation (i)

Substitute back into $x = 3 - 2y$

Where l_1 meets the y -axis, $x = 0$

$$0 - 4y - 5 = 0$$

$$4y = -5$$

$$y = -\frac{5}{4}$$

M is the point $(0, -\frac{5}{4})$

Where l_2 meets the y -axis, $x = 0$:

$$0 + 2y - 3 = 0$$

$$2y = 3$$

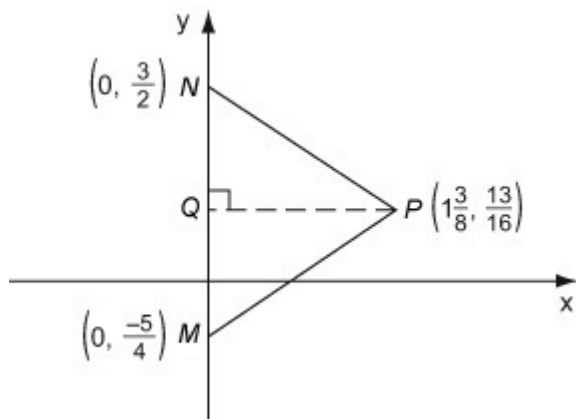
$$y = \frac{3}{2}$$

N is the point $(0, \frac{3}{2})$

Put $x = 0$ to find

where the

lines meet the y -axis.



Use a rough sketch to show the information

Use MN as the base and PQ as the perpendicular height.

$$MN = \frac{3}{2} + \frac{5}{4} = \frac{11}{4}$$

the same as its

The distance of P from the y -axis is

x -coordinate

$$PQ = 1 \frac{3}{8} = \frac{11}{8}$$

$$\begin{aligned} \text{Area of } \triangle MNP &= \frac{1}{2} \\ &= \frac{1}{2} (\text{base} \times \text{height}) \\ &= \frac{1}{2} \left(\frac{11}{4} \times \frac{11}{8} \right) \\ &= \frac{121}{64} \\ &= 1 \frac{57}{64} \end{aligned}$$

Solutionbank C1

Edexcel Modular Mathematics for AS and A-Level

Algebraic fractions

Exercise A, Question 7

Question:

The 5th term of an arithmetic series is 4 and the 15th term of the series is 39.

- (a) Find the common difference of the series.
- (b) Find the first term of the series.
- (c) Find the sum of the first 15 terms of the series.

Solution:

(a)

$$n^{\text{th}} \text{ term} = a + (n - 1)d$$

$$n = 5 : \quad a + 4d = 4 \quad (\text{i})$$

$$n = 15 : \quad a + 14d = 39 \quad (\text{ii}) \quad \text{formula.}$$

Substitute the given values into the n^{th} term

Subtract (ii)-(i)

$$10d = 35$$

Solve simultaneously.

$$d = 3 \frac{1}{2}$$

Common difference is $3 \frac{1}{2}$

$$\frac{1}{2}$$

(b)

$$a + (4 \times 3 \frac{1}{2}) = 4$$

Substitute back into equation (i).

$$a + 14 = 4$$

$$a = -10$$

First term is -10

(c)

$$S_n = \frac{1}{2}n (2a + (n - 1) d)$$

$$n = 15 , a$$

$$= - 10 , d = 3 \frac{1}{2}$$

values

Substitute the

into the

sum formula.

$$S_{15}$$

$$= \frac{1}{2} \times 15 (- 20 + (14 \times 3 \frac{1}{2}))$$

$$= \frac{15}{2} (- 20 + 49)$$

$$= \frac{15}{2} \times 29$$

$$= 217 \frac{1}{2}$$

Solutionbank C1

Edexcel Modular Mathematics for AS and A-Level

Algebraic fractions

Exercise A, Question 8

Question:

An athlete prepares for a race by completing a practice run on each of 11 consecutive days. On each day after the first day, he runs farther than he ran on the previous day. The lengths of his 11 practice runs form an arithmetic sequence with first term a km and common difference d km.

He runs 9 km on the 11th day, and he runs a total of 77 km over the 11 day period.

Find the value of a and the value of d .

Solution:

n^{th} term = $a + (n - 1)d$ distance run on the 11th day is the 11th term of the arithmetic sequence.

$n = 11 : a + 10d = 9$

$S_n = \frac{1}{2}n(2a + (n - 1)d)$ total distance run is the sum of

$S_n = 77, n = 11 :$ the arithmetic series.

$$\frac{1}{2} \times 11(2a + 10d) = 77$$

$$\frac{1}{2}(2a + 10d) = 7$$

$$a + 5d = 7$$

$$a + 10d = 9 \quad (\text{i})$$

$$a + 5d = 7 \quad (\text{ii})$$

Subtract (i)-(ii):

$$5d = 2$$

$$d = \frac{2}{5}$$

$$a + (10 \times \frac{2}{5}) = 9$$

$$a + 4 = 9$$

$$a = 5$$

The

11th

The

of

simpler to divide each

the equation by 11.

simultaneously

back

equation (i).

It is

side of

Solve

Substitute

into

Solutionbank C1

Edexcel Modular Mathematics for AS and A-Level

Algebraic fractions

Exercise A, Question 9

Question:

The r th term of an arithmetic series is $(2r - 5)$.

(a) Write down the first three terms of this series.

(b) State the value of the common difference.

(c) Show that $\sum_{r=1}^n (2r - 5) = n(n - 4)$.

Solution:

(a)

$$\begin{aligned} r = 1 : \quad 2r - 5 &= -3 \\ r = 2 : \quad 2r - 5 &= -1 \\ r = 3 : \quad 2r - 5 &= 1 \end{aligned}$$

First three terms are $-3, -1, 1$

(b)

Common difference $d = 2$

The terms increase by 2 each time

$$(U_{k+1} = U_k + 2)$$

(c)

$$\sum_{r=1}^n (2r - 5) = S_n \quad (2r - 5) \text{ is just}$$

$$S_n = \frac{1}{2}n(2a + (n - 1)d) \quad \text{sum of the series}$$

$a = -3, d = 2$ to n terms

$$\begin{aligned} S_n &= \frac{1}{2}n(-6 + 2(n - 1)) \\ &= \frac{1}{2}n(-6 + 2n - 2) \\ &= \frac{1}{2}n(2n - 8) \\ &= \frac{1}{2}n2(n - 4) \\ &= n(n - 4) \end{aligned}$$

Solutionbank C1

Edexcel Modular Mathematics for AS and A-Level

Algebraic fractions

Exercise A, Question 10

Question:

Ahmed plans to save £250 in the year 2001, £300 in 2002, £350 in 2003, and so on until the year 2020. His planned savings form an arithmetic sequence with common difference £50.

- (a) Find the amount he plans to save in the year 2011.
- (b) Calculate his total planned savings over the 20 year period from 2001 to 2020.

Ben also plans to save money over the same 20 year period. He saves £A in the year 2001 and his planned yearly savings form an arithmetic sequence with common difference £60.

Given that Ben's total planned savings over the 20 year period are equal to Ahmed's total planned savings over the same period,

- (c) calculate the value of A.

Solution:

- (a)
- $a = 250$ Write down the values
(Year 2001) of a and d for the
- $d = 50$ arithmetic series

Taking 2001 as Year 1
($n = 1$),
2011 is Year 11
($n = 11$).

Year 11 savings:

$$\begin{aligned}
 a + (n - 1)d &= 250 + (11 - 1)50 && \text{Use the term} \\
 &= 250 + (10 \times 50) && \text{formula } a + (n - 1)d \\
 &= 750
 \end{aligned}$$

Year 11 savings : £ 750

- (b)

$$S_n = \frac{1}{2}n (2a + (n - 1) d)$$

Using $n = 20$,

$$\begin{aligned} S_{20} &= \frac{1}{2} \times 20 (500 + \\ & (19 \times 50)) \\ &= 10 (500 + 950) \\ &= 10 \times 1450 \\ &= 14500 \end{aligned}$$

series.

The total savings
will be the sum of
the arithmetic

Total savings : £ 14
500

(c)

$$a = A \quad (\text{Year 2001})$$

$$d = 60$$

$$S_{20} = \frac{1}{2} \times 20 (2A + (19 \times 60))$$

$$\begin{aligned} S_{20} &= 10 (2A + 1140) \\ &= 20A + 11400 \end{aligned}$$

$$20A + 11400 = 14500$$

$$20A = 14500 - 11400$$

$$20A = 3100$$

$$A = 155$$

Write down the values
of a and d for Ben's series.

Use the sum formula.

Equate Ahmed's
and Ben's total savings.

Solutionbank C1

Edexcel Modular Mathematics for AS and A-Level

Algebraic fractions

Exercise A, Question 11

Question:

A sequence a_1, a_2, a_3, \dots is defined by

$$\begin{aligned} a_1 &= 3, \\ a_{n+1} &= 3a_n - 5, \quad n \geq 1. \end{aligned}$$

(a) Find the value of a_2 and the value of a_3 .

(b) Calculate the value of $\sum_{r=1}^5 a_r$.

Solution:

(a)

$$a_{n+1} = 3a_n - 5$$

$$n = 1 : a_2 = 3a_1 - 5$$

$$a_1 = 3, \text{ so } a_2 = 9 - 5$$

$$a_2 = 4$$

$$n = 2 : a_3 = 3a_2 - 5$$

$$a_2 = 4, \text{ so } a_3 = 12 - 5$$

$$a_3 = 7$$

Use the given

formula, with

$n = 1$ and $n = 2$

(b)

$$\sum_{a=1}^5 a_r = a_1 + a_2 + a_3 + a_4 + a_5$$

$$n = 3 : a_4 = 3a_3 - 5$$

$$a_3 = 7, \text{ so } a_4 = 21 - 5$$

$$a_4 = 16$$

$$n = 4 : a_5 = 3a_4 - 5$$

$$a_4 = 16, \text{ so } a_5 = 48 - 5$$

$$a_5 = 43$$

$$\sum_{a=1}^5 a_r = 3 + 4 + 7 + 16 + 43$$

$$= 73$$

This is not an arithmetic series.

The first three terms are 3, 4, 7.

The differences between

the terms are not the same.

You cannot use a standard formula,

so work out each separate term and

then add them together to find

the required sum.

Solutionbank C1

Edexcel Modular Mathematics for AS and A-Level

Algebraic fractions

Exercise A, Question 12

Question:

A sequence a_1, a_2, a_3, \dots is defined by

$$\begin{aligned} a_1 &= k, \\ a_{n+1} &= 3a_n + 5, \quad n \geq 1, \end{aligned}$$

where k is a positive integer.

(a) Write down an expression for a_2 in terms of k .

(b) Show that $a_3 = 9k + 20$.

(c) (i) Find $\sum_{r=1}^4 a_r$ in terms of k .

(ii) Show that $\sum_{r=1}^4 a_r$ is divisible by 10.

Solution:

(a)

$$a_{n+1} = 3a_n + 5$$

$$n = 1 : a_2 = 3a_1 + 5$$

$$a_2 = 3k + 5$$

Use the given

formula with $n = 1$

(b)

$$n = 2 : a_3 = 3a_2 + 5$$

$$= 3(3k + 5) + 5$$

$$= 9k + 15 + 5$$

$$a_3 = 9k + 20$$

(c)(i)

$$\sum_{r=1}^4 a_r = a_1 + a_2 + a_3 + a_4$$

$$n = 3 : a_4 = 3a_3 + 5$$

$$= 3(9k + 20) + 5$$

$$= 27k + 65$$

$$\sum_{r=1}^4 a_r = k + (3k + 5) + (9k + 20) + (27k + 65)$$

$$= 40k + 90$$

(ii)

$$\sum_{r=1}^4 a_r = 10(4k + 9)$$

There is a factor 10, so the sum is divisible by 10.

This is *not* an arithmetic series.

You cannot use a standard formula, so

work out each separate term and then add them together

to find the required sum.

Give a conclusion.

Solutionbank C1

Edexcel Modular Mathematics for AS and A-Level

Algebraic fractions

Exercise A, Question 13

Question:

A sequence a_1, a_2, a_3, \dots is defined by

$$\begin{aligned} a_1 &= k \\ a_{n+1} &= 2a_n - 3, \quad n \geq 1 \end{aligned}$$

(a) Show that $a_5 = 16k - 45$

Given that $a_5 = 19$, find the value of

(b) k

(c) $\sum_{r=1}^6 a_r$

Solution:

(a)

$$a_{n+1} = 2a_n - 3$$

$$n = 1 : a_2 = 2a_1 - 3$$

$$= 2k - 3$$

$$n = 2 : a_3 = 2a_2 - 3$$

$$= 2(2k - 3) - 3$$

$$= 4k - 6 - 3$$

$$= 4k - 9$$

$$n = 3 : a_4 = 2a_3 - 3$$

$$= 2(4k - 9) - 3$$

$$= 8k - 18 - 3$$

$$= 8k - 21$$

$$n = 4 : a_5 = 2a_4 - 3$$

$$= 2(8k - 21) - 3$$

$$= 16k - 42 - 3$$

$$a_5 = 16k - 45$$

Use the given formula

with $n = 1, 2, 3$ and 4.

(b)

$$a_5 = 19,$$

$$\text{so } 16k - 45 = 19$$

$$16k = 19 + 45$$

$$16k = 64$$

$$k = 4$$

(c)

6

$$\sum_{r=1} a_r = a_1 + a_2 + a_3 + a_4 + a_5 + a_6$$

This
is *not* an arithmetic series.

$$a_1 = k = 4$$

$$a_2 = 2k - 3 = 5$$

$$a_3 = 4k - 9 = 7$$

$$a_4 = 8k - 21 = 11$$

$$a_5 = 16k - 45 = 19$$

From the original formula,

$$a_6 = 2a_5 - 3 = (2 \times 19) - 3 = 35$$

6

$$\sum_{r=1} a_r = 4 + 5 + 7 + 11 + 19 + 35$$

$$= 81$$

You
cannot use a standard
formula,
so work
out each separate term and
then add
them together
to find
the required sum.

Solutionbank C1

Edexcel Modular Mathematics for AS and A-Level

Algebraic fractions

Exercise A, Question 14

Question:

An arithmetic sequence has first term a and common difference d .

(a) Prove that the sum of the first n terms of the series is

$$\frac{1}{2}n \left[2a + (n-1)d \right]$$

Sean repays a loan over a period of n months. His monthly repayments form an arithmetic sequence.

He repays £149 in the first month, £147 in the second month, £145 in the third month, and so on. He makes his final repayment in the n th month, where $n > 21$.

(b) Find the amount Sean repays in the 21st month.

Over the n months, he repays a total of £5000.

(c) Form an equation in n , and show that your equation may be written as

$$n^2 - 150n + 5000 = 0$$

(d) Solve the equation in part (c).

(e) State, with a reason, which of the solutions to the equation in part (c) is not a sensible solution to the repayment problem.

Solution:

(a)

$$S_n = a + (a+d) + (a+2d) + \dots + (a + (n-1)d)$$

You need to know this proof. Make

Reversing the sum :
sure that you understand it, and do

$$S_n = (a + (n-1)d) + \dots + (a+2d) + (a+d) + a$$

not miss out any of the steps.

Adding these two :
When you add, each pair of terms

$$2S_n = (2a + (n-1)d) + \dots + (2a + (n-1)d)$$

$$2S_n = n(2a + (n-1)d)$$

adds up to $2a + (n-1)d$,
and there are n pairs of terms.

$$S_n = \frac{1}{2}n(2a + (n-1)d)$$

(b)

$$a = 149 \quad (\text{First month})$$

$$d = -2$$

Write down the values of a and d for the arithmetic

series.

21st month:

$$\begin{aligned} a + (n - 1)d &= 149 + (20 \times -2) \\ &= 149 - 40 \\ &= 109 \end{aligned}$$

Use the term formula

$$a + (n - 1)d$$

He repays £ 109 in the 21st month

(c)

$$S_n = \frac{1}{2}n(2a + (n - 1)d) \quad \text{sum of}$$

The total he repays will be the arithmetic series.

$$= \frac{1}{2}n(298 - 2(n - 1))$$

$$= \frac{1}{2}n(298 - 2n + 2)$$

$$= \frac{1}{2}n(300 - 2n)$$

$$= \frac{1}{2}n2(150 - n)$$

$$= n(150 - n)$$

$$n(150 - n) = 5000$$

Equate S_n to 5000

$$150n - n^2 = 5000$$

$$n^2 - 150n + 5000 = 0$$

(d)

$$\frac{(n - 50)(n - 100)}{(n - 100)} = 0$$

Always

try to factorise the quadratic.

$n = 50$ or $n = 100$ quadratic formula would be

The

awkward

here with such large numbers.

(e)

$n = 100$ is not sensible .

For example, his repayment
in month 100 ($n = 100$)

would be $a + (n - 1) d$

Check back in the
context of

$$= 149 + (99 \times - 2)$$

$$= 149 - 198$$

$$= - 49$$

the problem to see if
the
solution is sensible.

A negative repayment is not
sensible .

© Pearson Education Ltd 2008

Solutionbank C1

Edexcel Modular Mathematics for AS and A-Level

Algebraic fractions

Exercise A, Question 15

Question:

A sequence is given by

$$a_1 = 2$$

$$a_{n+1} = a_n^2 - ka_n, \quad n \geq 1,$$

where k is a constant.

(a) Show that $a_3 = 6k^2 - 20k + 16$

Given that $a_3 = 2$,

(b) find the possible values of k .

For the larger of the possible values of k , find the value of

(c) a_2

(d) a_5

(e) a_{100}

Solution:

(a)

$$a_{n+1} = a_n^2 - ka_n$$

$$n = 1 : a_2 = a_1^2 - ka_1$$

$$= 4 - 2k$$

$$n = 2 : a_3 = a_2^2 - ka_2$$

$$= (4 - 2k)^2 - k(4 - 2k)$$

$$= 16 - 16k + 4k^2 - 4k + 2k^2$$

$$a_3 = 6k^2 - 20k + 16$$

Use the given formula
with $n = 1$ and 2.

(b)

$$a_3 = 2 :$$

$$6k^2 - 20k + 16 = 2$$

$$6k^2 - 20k + 14 = 0$$

$$3k^2 - 10k + 7 = 0$$

$$(3k - 7)$$

$$(k - 1) = 0$$

$$k =$$

$$\frac{7}{3} \text{ or } k = 1 \quad \text{using the quadratic formula.}$$

Divide
by 2 to make solution easier

factorise the quadratic rather
than

(c)

The larger k value is $\frac{7}{3}$

$$a_2 = 4 - 2k = 4 - \left(2 \times \frac{7}{3} \right)$$

$$= 4 - \frac{14}{3} = -\frac{2}{3}$$

(d)

$$a_{n+1} = a_n^2 - \frac{7}{3}a_n$$

$$n = 3 : a_4 = a_3^2 - \frac{7}{3}a_3$$

But $a_3 = 2$ is given, so

$$a_4 = 2^2 - \left(\frac{7}{3} \times 2 \right)$$

$$= 4 - \frac{14}{3} = -\frac{2}{3}$$

$$n = 4 : a_5 = a_4^2 - \frac{7}{3}a_4$$

$$= \left(-\frac{2}{3} \right)^2 - \left(\frac{7}{3} \times -\frac{2}{3} \right)$$

$$= \frac{4}{9} + \frac{14}{9} = \frac{18}{9}$$

$$a_5 = 2$$

(e)

$$a_2 = -\frac{2}{3}, a_3 = 2$$

$$a_4 = -\frac{2}{3}, a_5 = 2$$

For even values

$$\text{of } n, a_n = -\frac{2}{3}.$$

2.

$$\text{So } a_{100} = -\frac{2}{3}$$

sequence is

the values

$$-\frac{2}{3} \text{ and}$$

$$-\frac{2}{3}.$$

Notice that the

“oscillating” between

If n is even, $a_n =$

If n is odd, $a_n = 2.$

Solutionbank C1

Edexcel Modular Mathematics for AS and A-Level

Algebraic fractions

Exercise A, Question 16

Question:

Given that

$$y = 4x^3 - 1 + 2x^{\frac{1}{2}}, \quad x > 0,$$

find $\frac{dy}{dx}$.

Solution:

$$y = 4x^3 - 1 + 2x^{\frac{1}{2}}$$

$$\frac{dy}{dx} = nx^{n-1}$$

For $y = x^n$,

$$\frac{dy}{dx} = (4 \times 3x^2) + (2 \times \frac{1}{2}x^{-\frac{1}{2}})$$

the constant

Differentiating

- 1 gives

zero.

It is better to

$$\frac{dy}{dx} = 12x^2 + x^{-\frac{1}{2}}$$

write down an

unsimplified

version of the answer first

(in case you

make a mistake

when

simplifying).

(

Or:

$$\frac{dy}{dx} = 12x^2 +$$

$$\frac{1}{x^{\frac{1}{2}}}$$

$$\frac{1}{x^{\frac{1}{2}}}$$

is not necessary to change your

It

Or:

$$\frac{dy}{dx} = 12x^2 +$$

$$\frac{1}{\sqrt{x}}$$

answer into

one of these forms.

Solutionbank C1

Edexcel Modular Mathematics for AS and A-Level

Algebraic fractions

Exercise A, Question 17

Question:

Given that $y = 2x^2 - \frac{6}{x^3}$, $x \neq 0$,

(a) find $\frac{dy}{dx}$,

(b) find $\int y \, dx$.

Solution:

(a)

$$y = 2x^2 - \frac{6}{x^3} \qquad \frac{1}{x^n} = x^{-n}$$

$$= 2x^2 - 6x^{-3}$$

Use

$$\frac{dy}{dx} = (2 \times 2x^1) - (6 \times -3x^{-4}) \qquad \frac{dy}{dx} = nx^{n-1}$$

For $y = x^n$,

$$\frac{dy}{dx} = 4x + 18x^{-4}$$

an unsimplified version

first.

Write down
of the answer

(Or:

$$\frac{dy}{dx} = 4x + \frac{18}{x^4})$$

is not necessary to change

It

your answer

into this form.

(b)

$$\int (2x^2 - 6x^{-3}) dx$$
$$= \frac{2x^3}{3} - \frac{6x^{-2}}{-2} + C \quad \text{constant}$$

$$= \frac{2x^3}{3} + 3x^{-2} + C \quad \text{version}$$

$$\left(\text{Or: } \frac{2x^3}{3} + \frac{3}{x^2} + C \right)$$

$$\text{Use } \int x^n dx = \frac{x^{n+1}}{n+1} + C$$

Do not forget to include the

of integration, C .

Write down an unsimplified

of the answer first

It is not necessary to change

your answer into this form.

Solutionbank C1

Edexcel Modular Mathematics for AS and A-Level

Algebraic fractions

Exercise A, Question 18

Question:

Given that $y = 3x^2 + 4\sqrt{x}$, $x > 0$, find

(a) $\frac{dy}{dx}$,

(b) $\frac{d^2y}{dx^2}$,

(c) $\int y \, dx$.

Solution:

(a)

$y = 3x^2 + 4\sqrt{x}$ Use $\sqrt{x} = x^{\frac{1}{2}}$

$= 3x^2 + 4x^{\frac{1}{2}}$

$= (3 \times 2x^1) + (4 \times \frac{1}{2}x^{-\frac{1}{2}})$

$\frac{dy}{dx} = nx^{n-1}$

For $y = x^n$,

$\frac{dy}{dx}$

$\frac{dy}{dx}$

$= 6x + 2x^{-\frac{1}{2}}$

an
version
first.

Write down
unsimplified
of the answer

(

$\frac{dy}{dx} = 6x +$

Or:

$\frac{2}{x^{\frac{1}{2}}}$

It

is not necessary to change

Or:

$\frac{dy}{dx} = 6x +$

$\frac{2}{\sqrt{x}}$

your answer

into one of these forms

(b)

$$\frac{dy}{dx} = 6x + 2x^{-\frac{1}{2}}$$

again

Differentiate

$$\frac{d^2y}{dx^2} = 6 + \left(2 \times \frac{-1}{2} x^{-\frac{3}{2}} \right)$$

$$= 6 - x^{-\frac{3}{2}}$$

(

Or:

$$\frac{d^2y}{dx^2} = 6 -$$

$$\frac{1}{x^{\frac{3}{2}}}$$

is not necessary to change your

It

Or:

$$\frac{d^2y}{dx^2} = 6 -$$

$$\frac{1}{x\sqrt{x}}$$

answer

into one of these forms.

x

$$\frac{3}{2} = x^1 \times x^{\frac{1}{2}} = x\sqrt{x}$$

(c)

$$\int (3x^2 + 4x^{\frac{1}{2}}) dx$$

$$= \frac{3x^3}{3} + \frac{4x^{\frac{3}{2}}}{\left(\frac{3}{2}\right)} + C$$

$$= x^3 + 4 \left(\frac{2}{3}\right) x^{\frac{3}{2}} + C$$

$$= x^3 + \frac{8}{3}x^{\frac{3}{2}} + C$$

(Or: $x^3 + \frac{8}{3}x\sqrt{x} + C$)

Use $\int x^n dx = \frac{x^{n+1}}{n+1} + C$ Do

not forget to include the constant

of integration, C

Write down an unsimplified version

of the answer first.

It is not necessary to change your answer into this form.

Solutionbank C1

Edexcel Modular Mathematics for AS and A-Level

Algebraic fractions

Exercise A, Question 19

Question:

(i) Given that $y = 5x^3 + 7x + 3$, find

(a) $\frac{dy}{dx}$,

(b) $\frac{d^2y}{dx^2}$.

(ii) Find $\int \left(1 + 3\sqrt{x} - \frac{1}{x^2} \right) dx$.

Solution:

(i)

$$y = 5x^3 + 7x + 3$$

(a)

$$\frac{dy}{dx} = (5 \times 3x^2) + (7 \times 1x^0)$$

$$\frac{dy}{dx} = nx^{n-1}.$$

For $y = x^n$,

Differentiating the constant
3 gives zero.

$$\frac{dy}{dx} = 15x^2 + 7$$

Use $x^0 = 1$

Differentiating Kx gives K .

(b)

$$\frac{dy}{dx} = 15x^2 + 7$$

Differentiate again

$$\begin{aligned} \frac{d^2y}{dx^2} &= (15 \times 2x^1) \\ &= 30x \end{aligned}$$

(ii)

$$\int \left(1 + 3\sqrt{x} - \frac{1}{x^2} \right) dx$$

$$= \int \left(1 + 3x^{\frac{1}{2}} - x^{-2} \right) dx$$

include the
integration C.

$$= x + \frac{3x^{\frac{3}{2}}}{\left(\frac{3}{2}\right)} - \frac{x^{-1}}{(-1)} + C$$

$$= x + \left(3 \times \frac{2}{3} x^{\frac{3}{2}} \right) + x^{-1} + C$$

$$= x + 2x^{\frac{3}{2}} + x^{-1} + C$$

$$\text{(Or: } x + 2x\sqrt{x} + \frac{1}{x} + C \text{)}$$

$$\frac{1}{x^n} = x^{-n}$$

$$\frac{x^{n+1}}{n+1} + C .$$

Do not forget to
constant of

Use $\sqrt{x} = x^{\frac{1}{2}}$ and

Use $\int x^n dx =$

change
form.

It is not necessary to
your answer into this

Solutionbank C1

Edexcel Modular Mathematics for AS and A-Level

Algebraic fractions

Exercise A, Question 20

Question:

The curve C has equation $y = 4x + 3x^{\frac{3}{2}} - 2x^2$, $x > 0$.

(a) Find an expression for $\frac{dy}{dx}$.

(b) Show that the point $P(4, 8)$ lies on C .

(c) Show that an equation of the normal to C at the point P is $3y = x + 20$.

The normal to C at P cuts the x -axis at the point Q .

(d) Find the length PQ , giving your answer in a simplified surd form.

Solution:

(a)

$$y = 4x + 3x^{\frac{3}{2}} - 2x^2$$

$$\frac{3}{2} - 2x^2$$

$$\frac{dy}{dx} = (4 \times 1x^0) + (3 \times \frac{3}{2}x^{\frac{1}{2}}) - (2 \times 2x^1) \quad \text{For } y = x^n, \quad \frac{dy}{dx} = nx^{n-1}$$

$$\frac{dy}{dx} = 4 + \frac{9}{2}x^{\frac{1}{2}} - 4x$$

(b)

For $x = 4$,

$$y = (4 \times 4) + (3 \times 4^{\frac{3}{2}}) - (2 \times 4^2) \quad x^{\frac{3}{2}} = x^1 \times x^{\frac{1}{2}} = x \sqrt{x}$$

$$= 16 + (3 \times 4 \times 2) - 32$$

$$= 16 + 24 - 32 = 8$$

So $P(4, 8)$ lies on C

(c)

The value

For $x = 4$, of $\frac{dy}{dx}$

$$\begin{aligned} \frac{dy}{dx} &= 4 + \left(\frac{9}{2} \times 4 \frac{1}{2} \right) - (4 \times 4) \\ &= 4 + \left(\frac{9}{2} \times 2 \right) - 16 \\ &= 4 + 9 - 16 = -3 \end{aligned}$$

is the gradient of the tangent.

The gradient of the normal is perpendicular to the

The normal tangent, so

at P is $\frac{1}{3}$ the gradient is $-\frac{1}{m}$

Equation of the normal :

$$y - 8 = \frac{1}{3} (x - 4) \quad (x - x_1)$$

Use $y - y_1 = m$

$$y - 8 = \frac{x}{3} - \frac{4}{3}$$

Multiply by 3

$$\begin{aligned} 3y - 24 &= x - 4 \\ 3y &= x + 20 \end{aligned}$$

(d)

$$\begin{aligned} y = 0 : \quad 0 &= x + 20 \\ x &= -20 \end{aligned}$$

Use $y = 0$ to find where the normal cuts

the x -axis.

Q is the point $(-20, 0)$

$$\begin{aligned} PQ &= \frac{\sqrt{(4 - -20)^2 + (8 - 0)^2}}{\sqrt{(8 - 0)^2}} \\ &= \sqrt{24^2 + 8^2} \\ &= \sqrt{576 + 64} \\ &= \sqrt{640} \\ &= \sqrt{64 \times 10} \\ &= 8\sqrt{10} \end{aligned}$$

points is

The distance between two

$$\sqrt{(x_2 - x_1)^2 + (y_2 - y_1)^2}$$

To simplify the surd, find a factor which is an exact square (here $64 = 8^2$)

Solutionbank C1

Edexcel Modular Mathematics for AS and A-Level

Algebraic fractions

Exercise A, Question 21

Question:

The curve C has equation $y = 4x^2 + \frac{5-x}{x}$, $x \neq 0$. The point P on C has x -coordinate 1.

(a) Show that the value of $\frac{dy}{dx}$ at P is 3.

(b) Find an equation of the tangent to C at P .

This tangent meets the x -axis at the point $(k, 0)$.

(c) Find the value of k .

Solution:

(a)

$$y = 4x^2 + \frac{5-x}{x}$$

$$= 4x^2 + 5x^{-1} - 1$$

$$\frac{dy}{dx} = (4 \times 2x^1) + (5x - 1x^{-2})$$

constant -1 gives zero

$$\frac{dy}{dx} = 8x - 5x^{-2}$$

At P , $x = 1$, so

$$\frac{dy}{dx} = (8 \times 1) - (5 \times 1^{-2})$$

$$= 8 - 5 = 3$$

(b)

$$\text{At } x = 1, \frac{dy}{dx} = 3$$

The value of $\frac{dy}{dx}$

is the gradient of the

tangent

$$\text{At } x = 1, y = (4 \times 1^2) + \frac{5-1}{1}$$

$$y = 4 + 4 = 8$$

Equation of the tangent :

$$y - 8 = 3(x - 1)$$

$$y = 3x + 5$$

(c)

$$y = 0 : 0 = 3x + 5$$

$$3x = -5$$

$$x = -\frac{5}{3}$$

$$\text{So } K = -\frac{5}{3}$$

Divide $5 - x$ by x

For $y = x^n$, $\frac{dy}{dx} = nx^{n-1}$

Differentiating the

$$1^{-2} = \frac{1}{1^2} = \frac{1}{1} = 1$$

Use $y - y_1 = m$

$(x - x_1)$

Use $y = 0$ to find where the tangent

meets the x -axis

Solutionbank C1

Edexcel Modular Mathematics for AS and A-Level

Algebraic fractions

Exercise A, Question 22

Question:

The curve C has equation $y = \frac{1}{3}x^3 - 4x^2 + 8x + 3$.

The point P has coordinates $(3, 0)$.

(a) Show that P lies on C .

(b) Find the equation of the tangent to C at P , giving your answer in the form $y = mx + c$, where m and c are constants.

Another point Q also lies on C . The tangent to C at Q is parallel to the tangent to C at P .

(c) Find the coordinates of Q .

Solution:

(a)

$$y = \frac{1}{3}x^3 - 4x^2 + 8x + 3$$

At $x = 3$,

$$\begin{aligned}y &= \left(\frac{1}{3} \times 3^3\right) - (4 \times 3^2) + (8 \times 3) + 3 \\&= 9 - 36 + 24 + 3 \\&= 0\end{aligned}$$

So $P(3, 0)$ lies on C

(b)

$$\frac{dy}{dx} = \left(\frac{1}{3} \times 3x^2 \right) - (4 \times 2x^1) + (8 \times 1x^0)$$

For $y = x^n$,
 $\frac{dy}{dx} = nx^{n-1}$

Differentiating the constant 3 gives zero.

$$= x^2 - 8x + 8$$

At $x = 3$,

$$\frac{dy}{dx} = 3^2 - (8 \times 3) + 8$$

$$= 9 - 24 + 8 = -7$$

The value of $\frac{dy}{dx}$ is the gradient of the

tangent.

Equation of the tangent :

$$y - 0 = -7(x - 3)$$

$$(x - x_1)$$

Use $y - y_1 = m$

$$y = -7x + 21$$

This is in the

required form $y = mx + c$

(c)

At Q , $\frac{dy}{dx} = -7$

If the tangents are

parallel, they have the same gradient.

$$x^2 - 8x + 8 = -7$$

$$x^2 - 8x + 15 = 0$$

$$(x - 3)(x - 5) = 0$$

$$x = 3 \text{ or } x = 5$$

$x = 3$ at the point P

For Q , $x = 5$

$$y = \left(\frac{1}{3} \times 5^3 \right) - (4 \times 5^2) + (8 \times 5) + 3$$

Substitute $x = 5$

$$= \frac{125}{3} - 100 + 40 + 3$$

back into the equation

of C

$$= -15 \frac{1}{3}$$

Q is the point $(5, -15 \frac{1}{3})$

$$\frac{1}{3}$$

Solutionbank C1

Edexcel Modular Mathematics for AS and A-Level

Algebraic fractions

Exercise A, Question 23

Question:

$$f\left(\frac{1}{x}\right) = \frac{(2x+1)(x+4)}{\sqrt{x}}, \quad x > 0$$

(a) Show that $f(x)$ can be written in the form $Px^{\frac{3}{2}} + Qx^{\frac{1}{2}} + Rx^{-\frac{1}{2}}$, stating the values of the constants P , Q and R .

(b) Find $f'(x)$.

(c) Show that the tangent to the curve with equation $y = f(x)$ at the point where $x = 1$ is parallel to the line with equation $2y = 11x + 3$.

Solution:

(a)

$$\begin{aligned} f\left(\frac{1}{x}\right) &= \frac{(2x+1)(x+4)}{\sqrt{x}} \\ &= \frac{2x^2 + 9x + 4}{\sqrt{x}} \end{aligned}$$

Divide each term by

$$\frac{1}{x}, \text{ remembering}$$

$$= 2x^{\frac{3}{2}} + 9x^{\frac{1}{2}} + 4x^{-\frac{1}{2}}.$$

that $x^m \div x^n = x^{m-n}$

$$P = 2, \quad Q = 9, \quad R = 4$$

(b)

$$\begin{aligned} f'(x) &= \left(2 \times \frac{3}{2}x^{\frac{1}{2}}\right) + \left(9 \times \frac{1}{2}x^{-\frac{1}{2}}\right) + \left(4 \times \frac{-1}{2}x^{-\frac{3}{2}}\right) \end{aligned}$$

$f'(x)$ is the derivative of $f(x)$,

$$f'(x) = 3x^{\frac{1}{2}} + \frac{9}{2}x^{-\frac{1}{2}} - 2x^{-\frac{3}{2}}$$

so differentiate

(c)

At $x = 1$,

$$f'(1) = (3 \times 1^{\frac{1}{2}}) + (\frac{9}{2} \times 1^{\frac{-1}{2}}) - (2 \times 1^{\frac{-3}{2}})$$

of the tangent at $x = 1$

$$= 3 + \frac{9}{2} - 2 = \frac{11}{2}$$

The line $2y$

$$= 11x + 3 \text{ is}$$

y

$$= \frac{11}{2}x + \frac{3}{2}$$

The gradient is $\frac{11}{2}$

So the tangent to the curve where

$x = 1$ is parallel to this line,

since the gradients are equal.

$f'(1)$ is the gradient

$$1^n = 1 \text{ for any } n.$$

Compare with $y = mx + c$

Give a conclusion,

with a reason.

Solutionbank C1

Edexcel Modular Mathematics for AS and A-Level

Algebraic fractions Exercise A, Question 24

Question:

The curve C with equation $y = f(x)$ passes through the point $(3, 5)$.

Given that $f'(x) = x^2 + 4x - 3$, find $f(x)$.

Solution:

$f'(x)$	$= x^2 + 4x - 3$		To find $f(x)$ from $f'(x)$, integrate.
$f(x)$	$= \frac{x^3}{3} + \frac{4x^2}{2} - 3x + C$	$\frac{x^{n+1}}{n+1} + C$.	Use $\int x^n dx =$
	$= \frac{x^3}{3} + 2x^2 - 3x + C$	the	Do not forget to include
	constant of integration C .		
When $x = 3$, $f(x)$ $= 5$, so	passes	The curve	
$\frac{3^3}{3} + (2 \times 3^2) -$ $(3 \times 3) + C = 5$	$(3, 5)$,	through	
$9 + 18 - 9 + C$	$= 5$		so $f(3) = 5$.
C	$= -13$		
$f(x)$	$= \frac{x^3}{3} + 2x^2 - 3x - 13$		

Solutionbank C1

Edexcel Modular Mathematics for AS and A-Level

Algebraic fractions

Exercise A, Question 25

Question:

The curve with equation $y = f(x)$ passes through the point (1, 6). Given that

$$f'(x) = 3 + \frac{5x^2 + 2}{x^{\frac{1}{2}}}, \quad x > 0,$$

find $f(x)$ and simplify your answer.

Solution:

$$f'(x) = 3 + \frac{5x^2 + 2}{x^{\frac{1}{2}}} \quad \text{Divide } 5x^2 + 2 \text{ by } x^{\frac{1}{2}},$$

remembering that

$$x^m \div x^n = x^{m-n}$$

$$= 3 + 5x^{\frac{3}{2}} + 2x^{-\frac{1}{2}}$$

To find $f(x)$ from

$f'(x)$, integrate.

$$f(x) = 3x + \frac{5x^{\frac{5}{2}}}{(\frac{5}{2})} + \frac{2x^{\frac{1}{2}}}{(\frac{1}{2})} + C \quad \text{Use } \int x^n dx = \frac{x^{n+1}}{n+1} + C.$$

$$= 3x + (5 \times \frac{2}{5} x^{\frac{5}{2}}) + (2 \times \frac{2}{1} x^{\frac{1}{2}}) + C$$

Do not forget to include

$$= 3x + 2x^{\frac{5}{2}} + 4x^{\frac{1}{2}} + C$$

the constant of integration C .

When $x = 1$, $f(x) = 6$, so

The curve passes

$$(3 \times 1) + (2 \times 1^{\frac{5}{2}}) +$$

through (1, 6),

$$(4 \times 1^{\frac{1}{2}}) + C = 6$$

$$\text{so } f(1) = 6$$

$$3 + 2 + 4 + C$$

$$= 6$$

$$1^n = 1 \text{ for any } n.$$

$$C$$

$$= -3$$

$$f(x) = 3x + 2x^{\frac{5}{2}} + 4x^{\frac{1}{2}} - 3$$

Solutionbank C1

Edexcel Modular Mathematics for AS and A-Level

Algebraic fractions

Exercise A, Question 26

Question:

For the curve C with equation $y = f(x)$,

$$\frac{dy}{dx} = x^3 + 2x - 7$$

(a) Find $\frac{d^2y}{dx^2}$

(b) Show that $\frac{d^2y}{dx^2} \geq 2$ for all values of x .

Given that the point $P(2, 4)$ lies on C ,

(c) find y in terms of x ,

(d) find an equation for the normal to C at P in the form $ax + by + c = 0$, where a , b and c are integers.

Solution:

(a)

$$\frac{dy}{dx} = x^3 + 2x - 7$$

Differentiate to find

$$\frac{d^2y}{dx^2} = 3x^2 + 2$$

the second derivative

(b)

$$x^2 \geq 0 \text{ for any (real) } x.$$

The square of a

$$\text{So } 3x^2 \geq 0$$

real number

$$\text{So } 3x^2 + 2 \geq 2$$

cannot be negative.

$$\text{So } \frac{d^2y}{dx^2} \geq 2 \text{ for all values of } x.$$

Give a conclusion.

(c)

$$\frac{dy}{dx} = x^3 + 2x - 7$$

Integrate $\frac{dy}{dx}$ to

find y in terms

of x .

$$y = \frac{x^4}{4} + \frac{2x^2}{2} - 7x + C$$

include

Do not forget to

$$= \frac{x^4}{4} + x^2 - 7x + C$$

integration C .

the constant of

When $x = 2$, $y = 4$, so

Use the fact that

$$4 = \frac{2^4}{4} + 2^2 - (7 \times 2) + C$$

the curve.

$P(2, 4)$ lies on

$$4 = 4 + 4 - 14 + C$$

$$C = +10$$

$$y = \frac{x^4}{4} + x^2 + 7x + 10$$

(d)

For $x = 2$,

$$\begin{aligned} \frac{dy}{dx} &= 2^3 + (2 \times 2) - 7 \\ &= 8 + 4 - 7 = 5 \end{aligned}$$

The gradient of the normal

at P is $-\frac{1}{5}$

Equation of the normal :

$$y - 4 = \frac{-1}{5} (x - 2)$$

$$y - 4 = \frac{-x}{5} + \frac{2}{5}$$

$$5y - 20 = -x + 2$$

$$x + 5y - 22 = 0$$

The normal is

perpendicular to the tangent,

so the gradient is $-\frac{1}{m}$

This is in the required form $ax + by + c = 0$, where a , b and c are integers.

The value of

$$\frac{dy}{dx}$$

is the gradient

of the tangent .

Use $y - y_1 = m$

Multiply by 5

Solutionbank C1

Edexcel Modular Mathematics for AS and A-Level

Algebraic fractions

Exercise A, Question 27

Question:

For the curve C with equation $y = f(x)$,

$$\frac{dy}{dx} = \frac{1-x^2}{x^4}$$

Given that C passes through the point $\left(\frac{1}{2}, \frac{2}{3}\right)$,

(a) find y in terms of x .

(b) find the coordinates of the point on C at which $\frac{dy}{dx} = 0$.

Solution:

(a)

$$\frac{dy}{dx} = \frac{1-x^2}{x^4}$$

$$= x^{-4} - x^{-2}$$

$$y = \frac{x^{-3}}{-3} - \frac{x^{-1}}{-1} + C$$

$$= \frac{-x^{-3}}{3} + x^{-1} + C$$

constant of integration C .

$$y = \frac{-1}{3x^3} + \frac{1}{x} + C$$

will make it easier

calculate values

the next stage.

When $x =$

$$\frac{1}{2}, y =$$

$$\frac{2}{3}, \text{ so}$$

$$\frac{2}{3} = -\frac{8}{3} + 2 + C$$

$$C = \frac{2}{3} + \frac{8}{3} - 2 = \frac{4}{3}$$

$$y = \frac{-1}{3x^3} + \frac{1}{x} + \frac{4}{3}$$

(b)

Divide $1 - x^2$ by x^4

Integrate $\frac{dy}{dx}$ to

of x . Do not forget

find y in terms

to include

the

Use $x^{-n} = \frac{1}{x^n}$.

This

to

at

Use the fact that

$\left(\frac{1}{2}, \frac{2}{3}\right)$ lies on

the curve.

$$\frac{1-x^2}{x^4} = 0$$

is

If a fraction

equal

to zero, its

numerator

$$1-x^2 = 0$$

must be zero.

$$x^2 = 1$$

$$x = 1 \text{ or } x = -1$$

$$x = 1 : y = \frac{-1}{3} + 1 + \frac{4}{3}$$

$$y = 2$$

$$x = -1 : y = \frac{1}{3} - 1 + \frac{4}{3}$$

$$y = \frac{2}{3}$$

The points are

(1 , 2)

and (- 1 , $\frac{2}{3}$)

Solutionbank C1

Edexcel Modular Mathematics for AS and A-Level

Algebraic fractions

Exercise A, Question 28

Question:

The curve C with equation $y = f(x)$ passes through the point $(5, 65)$.

Given that $f'(x) = 6x^2 - 10x - 12$,

(a) use integration to find $f(x)$.

(b) Hence show that $f(x) = x(2x + 3)(x - 4)$.

(c) Sketch C , showing the coordinates of the points where C crosses the x -axis.

Solution:

(a)

$$f'(x) = 6x^2 - 10x - 12 \quad \text{find } f(x) \text{ from } f'(x), \text{ integrate} \quad \text{To}$$

$$f(x) = \frac{6x^3}{3} - \frac{10x^2}{2} - 12x + C \quad \text{not forget to} \quad \text{Do}$$

When $x = 5$, $y = 65$, so include the constant of integration C .

$$65 = \frac{6 \times 125}{3} - \frac{10 \times 25}{2} - 60 + C \quad \text{the fact that} \quad \text{Use}$$

the curve passes through $(5, 65)$

$$65 = 250 - 125 - 60 + C$$

$$C = 65 + 125 + 60 - 250$$

$$C = 0$$

$$f(x) = 2x^3 - 5x^2 - 12x$$

(b)

$$f(x) = x(2x^2 - 5x - 12)$$

$$f(x) = x(2x + 3)(x - 4)$$

(c)

Curve meets x -axis where $y = 0$

$$x(2x + 3)(x - 4) = 0$$

$$x = 0, x = -\frac{3}{2}, x = 4$$

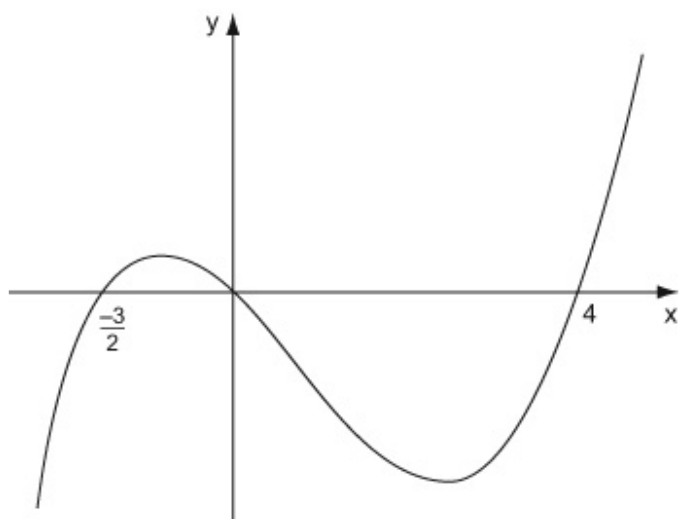
When $x \rightarrow \infty$, $y \rightarrow \infty$

When $x \rightarrow -\infty$, $y \rightarrow -\infty$

Put $y = 0$ and

solve for x

Check what happens to y for large positive and negative values of x .



Crosses x -axis at $(-\frac{3}{2}, 0)$, $(0, 0)$, $(4, 0)$

© Pearson Education Ltd 2008

Solutionbank C1

Edexcel Modular Mathematics for AS and A-Level

Algebraic fractions

Exercise A, Question 29

Question:

The curve C has equation $y = x^2 \left(x - 6 \right) + \frac{4}{x}, x > 0$.

The points P and Q lie on C and have x -coordinates 1 and 2 respectively.

(a) Show that the length of PQ is $\sqrt{170}$.

(b) Show that the tangents to C at P and Q are parallel.

(c) Find an equation for the normal to C at P , giving your answer in the form $ax + by + c = 0$, where a , b and c are integers.

Solution:

(a)

$$y = x^2 (x - 6) + \frac{4}{x}$$

At P , $x = 1$,

$$y = 1(1 - 6) + \frac{4}{1} = -1$$

P is $(1, -1)$

At Q , $x = 2$,

$$y = 4(2 - 6) + \frac{4}{2} = -14$$

Q is $(2, -14)$

$$\begin{aligned} PQ &= \sqrt{(2 - 1)^2 + (-14 - (-1))^2} \\ &= \sqrt{1^2 + (-13)^2} \\ &= \sqrt{1 + 169} = \sqrt{170} \end{aligned}$$

The distance between two points is

$$\sqrt{(x_2 - x_1)^2 + (y_2 - y_1)^2}$$

(b)

$$y = x^3 - 6x^2 + 4x^{-1}$$

$$\begin{aligned} \frac{dy}{dx} &= 3x^2 - (6 \times 2x^{-1}) + (4x - 1x^{-2}) \\ &= 3x^2 - 12x - 4x^{-2} \end{aligned}$$

At $x = 1$,

The value of $\frac{dy}{dx}$

$$\frac{dy}{dx} = 3 - 12 - 4 = -13$$

is the gradient of

the tangent.

At $x = 2$,

$$\begin{aligned} \frac{dy}{dx} &= (3 \times 4) - (12 \times 2) - (4 \times 2^{-2}) \\ &= 12 - 24 - \frac{4}{4} = -13 \end{aligned}$$

At P and also at Q the gradient is -13 , so the tangents are parallel (equal gradients).

Give a conclusion

(c)

The gradient of the normal is perpendicular to the tangent at P is –

$$\frac{1}{-13} = \frac{1}{13} \quad \text{the gradient is } -\frac{1}{m}$$

Equation of the normal:

$$y - (-1) = \frac{1}{13}(x - 1)$$

$$y + 1 = \frac{x}{13} - \frac{1}{13}$$

$$13y + 13 = x - 1$$

$$x - 13y - 14 = 0$$

integers.

The normal

tangent, so

b and c are

$$\text{Use } y - y_1 = m(x - x_1)$$

Multiply by 13

This is in the required form $ax + by + c = 0$, where a ,

Solutionbank C1

Edexcel Modular Mathematics for AS and A-Level

Algebraic fractions

Exercise A, Question 30

Question:

(a) Factorise completely $x^3 - 7x^2 + 12x$.

(b) Sketch the graph of $y = x^3 - 7x^2 + 12x$, showing the coordinates of the points at which the graph crosses the x -axis.

The graph of $y = x^3 - 7x^2 + 12x$ crosses the positive x -axis at the points A and B .

The tangents to the graph at A and B meet at the point P .

(c) Find the coordinates of P .

Solution:

(a)

$$x^3 - 7x^2 + 12x$$

$$= x(x^2 - 7x + 12)$$

$$= x(x - 3)(x - 4)$$

x is a common factor

(b)

Curve meets x -axis where $y = 0$.

$$x(x - 3)(x - 4) = 0$$

$$x = 0, x = 3, x = 4$$

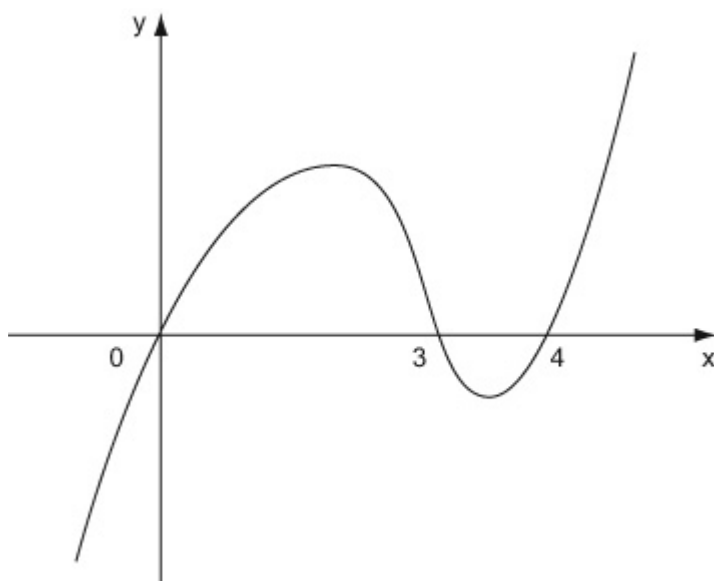
When $x \rightarrow \infty, y \rightarrow \infty$

When $x \rightarrow -\infty, y \rightarrow -\infty$

Put $y = 0$ and
solve for x .

Check what happens to
 y for large

positive and negative values of x



Crosses x -axis at $(0, 0)$, $(3, 0)$, $(4, 0)$

(c)

A and B are

$$(3, 0)$$

and

$$(4, 0)$$

$$\frac{dy}{dx} = 3x^2 - 14x + 12$$

At $x = 3$,

(A)

value of $\frac{dy}{dx}$

The

$$\frac{dy}{dx} = 27 - 42 + 12 = -3$$

is the gradient
of the tangent.

At $x = 4$

(B)

$$\frac{dy}{dx} = 48 - 56 + 12 = 4$$

Tangent at A:

$$y - 0 = -3(x - 3)$$

$$(x - x_1)$$

Use $y - y_1 = m$

$$y = -3x + 9 \quad (\text{i})$$

Tangent at B:

$$y - 0 = 4(x - 4)$$

$$y = 4x - 16 \quad (\text{ii})$$

Subtract

$$(\text{ii}) -$$

$$(\text{i}) :$$

$$0 = 7x - 25$$

simultaneously to

Solve (i) and (ii)

$$x = \frac{25}{7}$$

intersection

find the

point

of the tangents

Substituting

back into (i):

$$y = -\frac{75}{7} + 9 = -\frac{12}{7}$$

P is the

point $(\frac{25}{7},$

$$\frac{-12}{7})$$