

Solutionbank M4

Edexcel AS and A Level Modular Mathematics

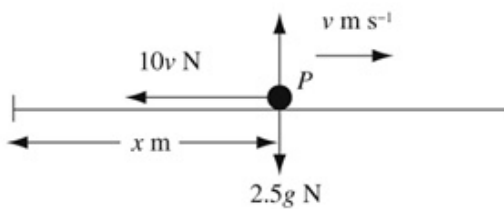
Resisted motion of a particle moving in a straight line

Exercise A, Question 1

Question:

A particle P of mass 2.5 kg moves in a straight horizontal line. When the speed of P is $v \text{ m s}^{-1}$, the resultant force acting on P is a resistance of magnitude $10v \text{ N}$. Find the time P takes to slow down from 24 m s^{-1} to 6 m s^{-1} .

Solution:



$$R(\rightarrow) \quad F = ma$$

$$-10v = 2.5 \frac{dv}{dt}$$

Separating the variables

$$\int 4 \, dt = - \int \frac{1}{v} \, dv$$

$$4t = A - \ln v$$

When $t = 0$, $v = 24$

$$0 = A - \ln 24 \Rightarrow A = \ln 24$$

Hence

$$4t = \ln 24 - \ln v$$

$$t = \frac{1}{4} \ln \left(\frac{24}{v} \right)$$

When $v = 6$

$$t = \frac{1}{4} \ln 4 \quad (\approx 0.347)$$

P takes $\frac{1}{4} \ln 4 \text{ s}$ ($= 0.347 \text{ s}$, 3 d.p.) to slow from 24 m s^{-1} to 6 m s^{-1} .

Solutionbank M4

Edexcel AS and A Level Modular Mathematics

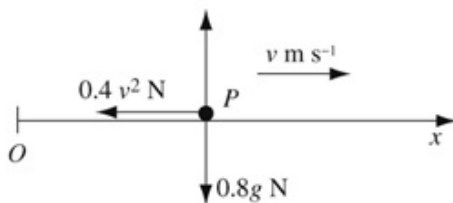
Resisted motion of a particle moving in a straight line

Exercise A, Question 2

Question:

A particle P of mass 0.8 kg is moving along the axis Ox in the direction of x -increasing. When the speed of P is $v \text{ m s}^{-1}$, the resultant force acting on P is a resistance of magnitude $0.4v^2 \text{ N}$. Initially P is at O and is moving with speed 12 m s^{-1} . Find the distance P moves before its speed is halved.

Solution:



$$R(\rightarrow) \quad \mathbf{F} = m\mathbf{a}$$

$$-0.4v^2 = 0.8v \frac{dv}{dx}$$

Separating the variables

$$\int 1 \, dx = -2 \int \frac{1}{v} \, dv$$

$$x = A - 2 \ln v$$

$$\text{At } x = 0, \, v = 12$$

$$0 = A - 2 \ln 12 \Rightarrow A = 2 \ln 12$$

Hence

$$x = 2 \ln 12 - 2 \ln v = 2 \ln \left(\frac{12}{v} \right)$$

$$\text{When } v = 6$$

$$x = 2 \ln 2$$

The distance P moves before its speed is halved is $2 \ln 2 \text{ m} = 1.39 \text{ m}$ (3 s.f.).

Solutionbank M4

Edexcel AS and A Level Modular Mathematics

Resisted motion of a particle moving in a straight line

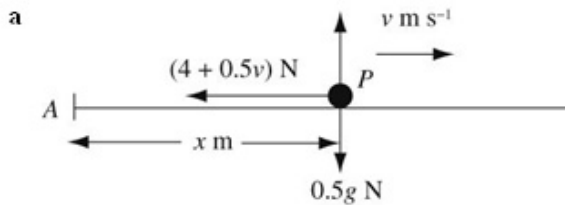
Exercise A, Question 3

Question:

A particle P of mass 0.5 kg moves in a straight horizontal line against a resistance of magnitude $(4 + 0.5v)\text{N}$, where $v \text{ m s}^{-1}$ is the speed of P at time t seconds. When $t = 0$, P is at a point A moving with speed 12 m s^{-1} . The particle P comes to rest at the point B . Find

- a** the time P takes to move from A to B ,
- b** the distance AB .

Solution:



$$R(\rightarrow) \quad F = ma$$

$$-(4 + 0.5v) = 0.5 \frac{dv}{dt}$$

Separating the variables

$$\int 1 dt = - \int \frac{1}{8+v} dv$$

$$t = A - \ln(8+v)$$

When $t = 0$, $v = 12$

$$0 = A - \ln 20 \Rightarrow A = \ln 20$$

Hence

$$t = \ln 20 - \ln(8+v) = \ln \left(\frac{20}{8+v} \right)$$

When $v = 0$

$$t = \ln \left(\frac{20}{8} \right) = \ln 2.5$$

The time taken for P to move from A to B is $\ln 2.5 \text{ s} = 0.916 \text{ s}$ (3 d.p.).

b $R(\rightarrow) \quad F = ma$

$$-(4 + 0.5v) = 0.5v \frac{dv}{dx}$$

Separating the variables

$$\int 1 dx = - \int \frac{v}{8+v} dv$$

$$\frac{v}{8+v} = \frac{8+v-8}{8+v} = 1 - \frac{8}{8+v}$$

Hence

$$\int 1 dx = - \int \left(1 - \frac{8}{8+v} \right) dv$$

$$x = A - v + 8 \ln(8+v)$$

At $x = 0$, $v = 12$

$$0 = A - 12 + 8 \ln 20 \Rightarrow A = 12 - 8 \ln 20$$

Hence $x = 12 - v - (8 \ln 20 - 8 \ln(8+v))$

$$= 12 - v - 8 \ln \left(\frac{20}{8+v} \right)$$

When $v = 0$

$$x = 12 - 8 \ln 2.5$$

$$AB = (12 - 8 \ln 2.5) \text{ m} = 4.67 \text{ m} \quad (3 \text{ s.f.})$$

Solutionbank M4

Edexcel AS and A Level Modular Mathematics

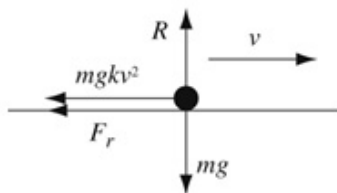
Resisted motion of a particle moving in a straight line

Exercise A, Question 4

Question:

A particle of mass m is projected along a rough horizontal plane with velocity $u \text{ m s}^{-1}$. The coefficient of friction between the particle and the plane is μ . When the particle is moving with speed $v \text{ m s}^{-1}$, it is also subject to an air resistance of magnitude $kmgv^2$, where k is a constant. Find the distance the particle moves before coming to rest.

Solution:



$$R(\uparrow) \quad R = mg$$

As friction is limiting

$$F_r = \mu R = \mu mg$$

$$R(\rightarrow) \quad \mathbf{F} = m\mathbf{a}$$

$$-F_r - kmgv^2 = ma$$

$$-\mu mg - kmgv^2 = m \frac{dv}{dx}$$

Separating the variables

$$\int g \, dx = - \int \frac{v}{\mu + kv^2} \, dv$$

$$gx = A - \frac{1}{2k} \ln(\mu + kv^2)$$

At $x = 0, v = u$

$$0 = A - \frac{1}{2k} \ln(\mu + ku^2) \Rightarrow A = \frac{1}{2k} \ln(\mu + ku^2)$$

Hence

$$x = \frac{1}{2kg} (\ln(\mu + ku^2) - \ln(\mu + kv^2)) = \frac{1}{2kg} \ln \left(\frac{\mu + ku^2}{\mu + kv^2} \right)$$

When $v = 0$

$$x = \frac{1}{2kg} \ln \left(\frac{\mu + ku^2}{\mu} \right)$$

Solutionbank M4

Edexcel AS and A Level Modular Mathematics

Resisted motion of a particle moving in a straight line

Exercise A, Question 5

Question:

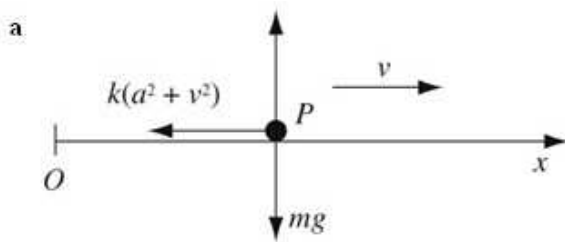
A particle P of mass m is moving along the axis Ox in the direction of x -increasing. At time t seconds, the velocity of P is v . The only force acting on P is a resistance of magnitude $k(a^2 + v^2)$. At time $t = 0$, P is at O and its speed is U . At time

$$t = T, v = \frac{1}{2}U$$

a Show that $T = \frac{m}{ak} \left[\arctan \left(\frac{U}{a} \right) - \arctan \left(\frac{U}{2a} \right) \right]$.

b Find the distance travelled by P as its speed is reduced from U to $\frac{1}{2}U$.

Solution:



$$R(\rightarrow) \quad F = ma$$

$$-k(a^2 + v^2) = m \frac{dv}{dt}$$

Separating the variables

$$\int 1 dt = -\frac{m}{k} \int \frac{1}{a^2 + v^2} dv$$

$$t = A - \frac{m}{ak} \arctan\left(\frac{v}{a}\right)$$

When $t = 0, v = U$

$$0 = A - \frac{m}{ak} \arctan\left(\frac{U}{a}\right) \Rightarrow A = \frac{m}{ak} \arctan\left(\frac{U}{a}\right)$$

Hence

$$t = \frac{m}{ak} \arctan\left(\frac{U}{a}\right) - \frac{m}{ak} \arctan\left(\frac{v}{a}\right)$$

When $t = T, v = \frac{1}{2}U$

$$T = \frac{m}{ak} \arctan\left(\frac{U}{a}\right) - \frac{m}{ak} \arctan\left(\frac{\frac{1}{2}U}{a}\right)$$

$$T = \frac{m}{ak} \left[\arctan\left(\frac{U}{a}\right) - \arctan\left(\frac{U}{2a}\right) \right], \text{ as required}$$

b $R(\rightarrow) \quad F = ma$

$$-k(a^2 + v^2) = mv \frac{dv}{dx}$$

Separating the variables

$$\int 1 dx = -\frac{m}{k} \int \frac{v}{a^2 + v^2} dv$$

$$x = A - \frac{m}{2k} \ln(a^2 + v^2)$$

When $x = 0, v = U$

$$0 = A - \frac{m}{2k} \ln(a^2 + U^2) \Rightarrow A = \frac{m}{2k} \ln(a^2 + U^2)$$

Hence

$$x = \frac{m}{2k} \ln(a^2 + U^2) - \frac{m}{2k} \ln(a^2 + v^2) = \frac{m}{2k} \ln\left(\frac{a^2 + U^2}{a^2 + v^2}\right)$$

When $v = \frac{1}{2}U$

$$x = \frac{m}{2k} \ln\left(\frac{a^2 + U^2}{a^2 + \frac{1}{4}U^2}\right) = \frac{m}{2k} \ln\left(\frac{4a^2 + 4U^2}{4a^2 + U^2}\right)$$

Solutionbank M4

Edexcel AS and A Level Modular Mathematics

Resisted motion of a particle moving in a straight line

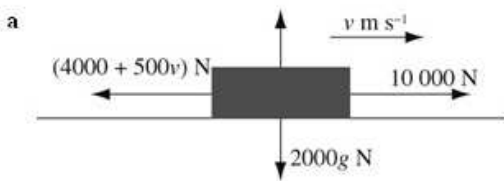
Exercise A, Question 6

Question:

A lorry of mass 2000 kg travels along a straight horizontal road. The engine of the lorry produces a constant driving force of magnitude 10 000 N. At time t seconds, the speed of the lorry is $v \text{ m s}^{-1}$. As the lorry moves, the total resistance to the motion of the lorry is of magnitude $(4000 + 500v) \text{ N}$. The lorry starts from rest. Find

- v in terms of t ,
- the terminal speed of the lorry.

Solution:



$$R(\rightarrow) \quad F = ma$$

$$10\,000 - (4000 + 500v) = 2000a$$

$$6000 - 500v = 2000 \frac{dv}{dt}$$

Dividing throughout by 500

$$12 - v = 4 \frac{dv}{dt}$$

Separating the variables

$$\int 1 \, dt = 4 \int \frac{1}{12 - v} \, dv$$

$$t = A - 4 \ln(12 - v)$$

$$\ln(12 - v) = B - \frac{t}{4}, \text{ where } B = \frac{1}{4}A$$

$$12 - v = e^{B - \frac{t}{4}} = e^B e^{-\frac{t}{4}} = C e^{-\frac{t}{4}}, \text{ where } C = e^B$$

Hence

$$v = 12 - C e^{-\frac{t}{4}}$$

When $t = 0, v = 0$

$$0 = 12 - C \Rightarrow C = 12$$

Hence

$$v = 12 \left(1 - e^{-\frac{t}{4}} \right)$$

- As $t \rightarrow \infty, e^{-\frac{t}{4}} \rightarrow 0$ and $v \rightarrow 12$

The terminal speed of the lorry is 12 m s^{-1} .

Solutionbank M4

Edexcel AS and A Level Modular Mathematics

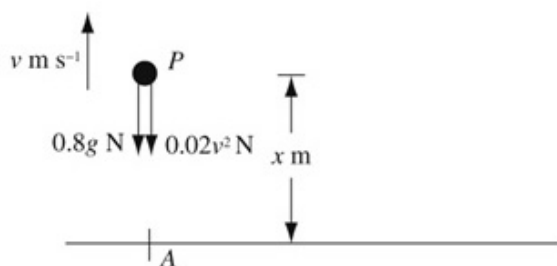
Resisted motion of a particle moving in a straight line

Exercise B, Question 1

Question:

A particle P of mass 0.8 kg is projected vertically upwards with velocity 30 m s^{-1} from a point A on horizontal ground. Air resistance is modelled as a force of magnitude $0.02v^2 \text{ N}$, where $v \text{ m s}^{-1}$ is the velocity of P . Find the greatest height above A attained by P .

Solution:



$$R(\uparrow) \quad F = ma$$

$$-0.8g - 0.02v^2 = 0.8a$$

$$-7.84 - 0.02v^2 = 0.8v \frac{dv}{dx}$$

Separating the variables

$$\int 1 dx = -0.8 \int \frac{v}{7.84 + 0.02v^2} dv$$

$$x = A - \frac{0.8}{0.04} \ln(7.84 + 0.02v^2)$$

At $x = 0$, $v = 30$

$$0 = A - 20 \ln(7.84 + 18) \Rightarrow A = 20 \ln 25.84$$

Hence

$$x = 20 \ln 25.84 - 20 \ln(7.84 + 0.02v^2)$$

$$= 20 \ln \left(\frac{25.84}{7.84 + 0.02v^2} \right)$$

At the greatest height, $v = 0$

$$x = 20 \ln \left(\frac{25.84}{7.84} \right) \approx 23.9$$

The greatest height above A attained by P is 23.9 m (3 s.f.).

Solutionbank M4

Edexcel AS and A Level Modular Mathematics

Resisted motion of a particle moving in a straight line

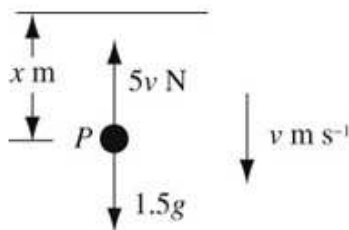
Exercise B, Question 2

Question:

A particle P of mass 1.5 kg is released from rest at time $t = 0$ and falls vertically through a liquid. The liquid resists the motion of P with a force of magnitude $5v \text{ N}$ where $v \text{ m s}^{-1}$ is the speed of P at time t seconds.

Find the value of t when the speed of P is 2 m s^{-1} .

Solution:



$$R(\downarrow) \quad F = ma$$

$$1.5g - 5v = 1.5a$$

$$14.7 - 5v = 1.5 \frac{dv}{dt}$$

Separating the variables

$$\int 1 dt = 1.5 \int \frac{1}{14.7 - 5v} dv$$

$$t = A - \frac{1.5}{5} \ln(14.7 - 5v)$$

When $t = 0$, $v = 0$

$$0 = A - 0.3 \ln 14.7 \Rightarrow A = 0.3 \ln 14.7$$

Hence

$$t = 0.3 \ln 14.7 - 0.3 \ln(14.7 - 5v)$$

$$= 0.3 \ln \left(\frac{14.7}{14.7 - 5v} \right)$$

When $v = 2$

$$t = 0.3 \ln \left(\frac{14.7}{14.7 - 10} \right) = 0.342 \text{ s (3 s.f.)}$$

Solutionbank M4

Edexcel AS and A Level Modular Mathematics

Resisted motion of a particle moving in a straight line

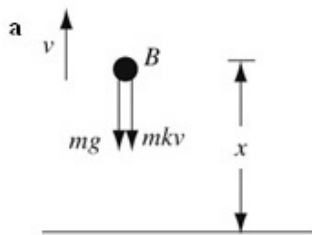
Exercise B, Question 3

Question:

A small ball B of mass m is projected upwards from horizontal ground with speed u . Air resistance is modelled as a force of magnitude mkv , where $v \text{ m s}^{-1}$ is the velocity of B at time t seconds.

- Show that the greatest height above the ground reached by B is $\frac{u}{k} - \frac{g}{k^2} \ln \left(1 + \frac{ku}{g} \right)$.
- Find the time taken to reach this height.

Solution:



$$R(\uparrow) \quad F = ma$$

$$-mg - mkv = ma$$

$$-g - kv = v \frac{dv}{dx}$$

Separating the variables

$$\int 1 \, dx = - \int \frac{v}{g + kv} \, dv$$

$$= - \frac{1}{k} \int \frac{g + kv - g}{g + kv} \, dv$$

$$= - \frac{1}{k} \int \left(1 - \frac{g}{g + kv} \right) \, dv$$

$$x = A - \frac{1}{k} \left[v - \frac{g}{k} \ln(g + kv) \right] = A - \frac{v}{k} + \frac{g}{k^2} \ln(g + kv)$$

At $x = 0, v = u$

$$0 = A - \frac{u}{k} + \frac{g}{k^2} \ln(g + ku) \Rightarrow A = \frac{u}{k} - \frac{g}{k^2} \ln(g + ku)$$

Hence

$$x = \frac{u}{k} - \frac{v}{k} - \left[\frac{g}{k^2} \ln(g + ku) - \frac{g}{k^2} \ln(g + kv) \right]$$

$$= \frac{1}{k} (u - v) - \frac{g}{k^2} \ln \left(\frac{g + ku}{g + kv} \right)$$

At the greatest height, $v = 0$

$$x = \frac{u}{k} - \frac{g}{k^2} \ln \left(\frac{g + ku}{g} \right) = \frac{u}{k} - \frac{g}{k^2} \ln \left(1 + \frac{ku}{g} \right), \text{ as required}$$

$$\mathbf{b} \quad -g - kv = \frac{dv}{dt}$$

Separating the variables

$$\int 1 \, dt = - \int \frac{1}{g + kv} \, dv$$

$$t = B - \frac{1}{k} \ln(g + kv)$$

When $t = 0, v = u$

$$0 = B - \frac{1}{k} \ln(g + ku) \Rightarrow B = \frac{1}{k} \ln(g + ku)$$

Hence

$$t = \frac{1}{k} \ln(g + ku) - \frac{1}{k} \ln(g + kv) = \frac{1}{k} \ln \left(\frac{g + ku}{g + kv} \right)$$

At the greatest height, $v = 0$

$$t = \frac{1}{k} \ln \left(\frac{g + ku}{g} \right) = \frac{1}{k} \ln \left(1 + \frac{ku}{g} \right)$$

Solutionbank M4

Edexcel AS and A Level Modular Mathematics

Resisted motion of a particle moving in a straight line

Exercise B, Question 4

Question:

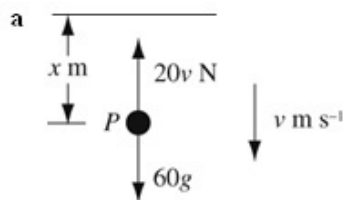
A parachutist of mass 60 kg falls vertically from rest from a fixed balloon. For the first 3 s of her motion, her fall is resisted by air resistance of magnitude $20v$ N where $v \text{ m s}^{-1}$ is her velocity.

a Find the velocity of the parachutist after 3 s.

After 3 s, her parachute opens and her further motion is resisted by a force of magnitude $(20v + 60v^2)$ N.

b Find the terminal speed of the parachutist.

Solution:



$$R(\downarrow) \quad F = ma$$

$$60g - 20v = 60a$$

$$588 - 20v = 60 \frac{dv}{dt}$$

Separating the variables

$$\int 1 dt = 60 \int \frac{1}{588 - 20v} dv$$

$$t = A - \frac{60}{20} \ln(588 - 20v)$$

When $t = 0, v = 0$

$$0 = A - 3 \ln 588 \Rightarrow A = 3 \ln 588$$

Hence

$$t = 3 \ln 588 - 3 \ln(588 - 20v) = 3 \ln \left(\frac{588}{588 - 20v} \right)$$

When $t = 3$

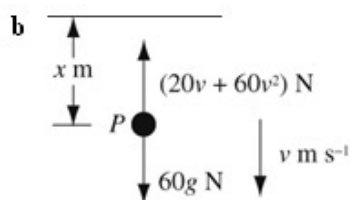
$$3 = 3 \ln \left(\frac{588}{588 - 20v} \right) \Rightarrow \ln \left(\frac{588}{588 - 20v} \right) = 1$$

$$\frac{588}{588 - 20v} = e$$

$$588 - 20v = 588e^{-1}$$

$$v = \frac{588}{20} (1 - e^{-1}) \approx 18.6$$

The velocity of the parachutist after 3 s is 18.6 m s^{-1} (3 s.f.)



$$R(\downarrow) \quad \mathbf{F} = m\mathbf{a}$$

$$60g - (20v + 60v^2) = 60a$$

At the terminal speed $a = 0$

$$588 - 20v - 60v^2 = 0$$

$$60v^2 + 20v - 588 = 0$$

Only the positive root need be considered

$$v = \frac{-20 + \sqrt{(20^2 + 4 \times 60 \times 588)}}{120} \approx 2.97$$

The terminal speed of the parachutist is 2.97 m s^{-1} (3 s.f.)

Solutionbank M4

Edexcel AS and A Level Modular Mathematics

Resisted motion of a particle moving in a straight line

Exercise B, Question 5

Question:

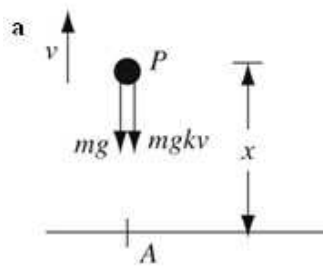
A particle P of mass m is projected vertically upwards with speed u from a point A on horizontal ground. The particle P is subject to air resistance of magnitude $mgkv$, where v is the speed of P and k is a positive constant.

a Find the greatest height above A reached by P .

Assuming P has not reached the ground,

b find an expression for the speed of the particle t seconds after it has reached its greatest height.

Solution:



$$R(\uparrow) \quad F = ma$$

$$-mg - mgkv = ma$$

$$-g - gkv = v \frac{dv}{dx}$$

Separating the variables

$$-\int g \, dx = \int \frac{v}{1+kv} \, dv$$

$$= \frac{1}{k} \int \frac{1+kv-1}{1+kv} \, dv$$

$$= \frac{1}{k} \int \left(1 - \frac{1}{1+kv} \right) dv$$

$$-gx = \frac{1}{k} \left[v - \frac{1}{k} \ln(1+kv) \right] + A$$

At $x=0, v=u$

$$0 = \frac{1}{k} \left[u - \frac{1}{k} \ln(1+ku) \right] + A \Rightarrow A = -\frac{u}{k} + \frac{1}{k^2} \ln(1+ku)$$

Hence

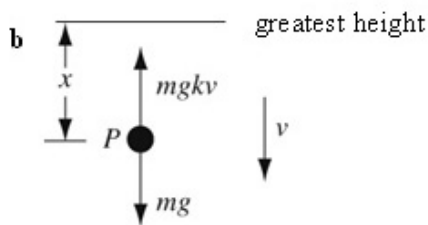
$$-gx = \frac{v}{k} - \frac{1}{k^2} \ln(1+kv) - \frac{u}{k} + \frac{1}{k^2} \ln(1+ku)$$

$$x = \frac{1}{gk} (u - v) - \frac{1}{gk^2} \ln \left(\frac{1+ku}{1+kv} \right)$$

At the greatest height $v=0$

$$x = \frac{u}{gk} - \frac{1}{gk^2} \ln(1+ku) = \frac{1}{gk^2} (ku - \ln(1+ku))$$

The greatest height above A reached by P is $\frac{1}{gk^2} (ku - \ln(1+ku))$.



$$R(\downarrow) \quad F = ma$$

$$mg - mgkv = ma$$

$$g(1 - kv) = \frac{dv}{dt}$$

Separating the variables

$$\int g \, dt = \int \frac{1}{1 - kv} \, dv$$

$$gt = A - \frac{1}{k} \ln(1 - kv)$$

When $t = 0, v = 0$

$$0 = A - \ln 1 \Rightarrow A = 0$$

Hence

$$gt = -\frac{1}{k} \ln(1 - kv)$$

$$-kgt = \ln(1 - kv)$$

$$1 - kv = e^{-kgt}$$

$$v = \frac{1}{k} (1 - e^{-kgt})$$

Solutionbank M4

Edexcel AS and A Level Modular Mathematics

Resisted motion of a particle moving in a straight line

Exercise B, Question 6

Question:

A particle of mass m is projected vertically upwards from a point A on horizontal ground with speed u . The particle reaches its greatest height above the ground at the point B .

a Ignoring air resistance, find the distance AB .

Instead of ignoring air resistance, it is modelled as a resisting force of magnitude mkv^2 , where $v \text{ m s}^{-1}$ is the velocity of the particle and k is a positive constant. Using this model find

b the distance AB ,

c the work done by air resistance against the motion of the particle as it moves from A to B .

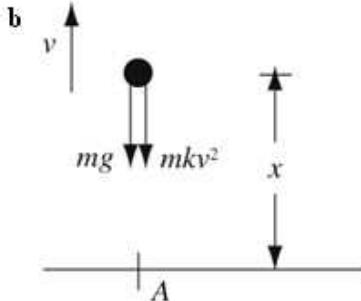
Solution:

a $v^2 = u^2 + 2as$

At the greatest height, $v = 0$

$$0 = u^2 - 2g \times AB$$

$$AB = \frac{u^2}{2g}$$



$$R(\uparrow) \quad F = ma$$

$$-mg - mkv^2 = ma$$

$$-g - kv^2 = v \frac{dv}{dx}$$

$$\int 1 \, dx = - \int \frac{v}{g + kv^2} \, dv$$

$$x = A - \frac{1}{2k} \ln(g + kv^2)$$

At $x = 0, v = u$

$$0 = A - \frac{1}{2k} \ln(g + ku^2) \Rightarrow A = \frac{1}{2k} \ln(g + ku^2)$$

Hence

$$x = \frac{1}{2k} \ln(g + ku^2) - \frac{1}{2k} \ln(g + kv^2) = \frac{1}{2k} \ln \left(\frac{g + ku^2}{g + kv^2} \right)$$

At the greatest height $v = 0$ and $x = AB$

$$AB = \frac{1}{2k} \ln \left(\frac{g + ku^2}{g} \right) = \frac{1}{2k} \ln \left(1 + \frac{ku^2}{g} \right)$$

- c** The work done by air resistance is the difference between the potential energies of the particle at the greatest heights in parts **a** and **b** and is given by

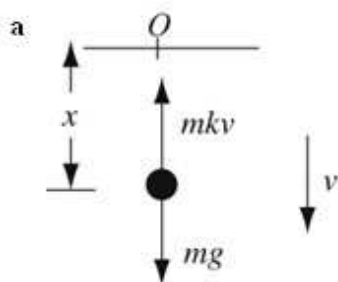
$$\begin{aligned} & mg \times \frac{u^2}{2g} - mg \times \frac{1}{2k} \ln \left(1 + \frac{ku^2}{g} \right) \\ &= mg \left(\frac{u^2}{2g} - \frac{1}{2k} \ln \left(1 + \frac{ku^2}{g} \right) \right) \end{aligned}$$

Solutionbank M4**Edexcel AS and A Level Modular Mathematics****Resisted motion of a particle moving in a straight line****Exercise B, Question 7****Question:**

A particle P of mass m is projected vertically downwards from a fixed point O with speed $\frac{g}{2k}$, where k is a constant. At time t seconds after projection, the displacement of P from O is x and the velocity of P is v . The particle P is subject to a resistance of magnitude mkv .

a Show that $v = \frac{g}{2k}(2 - e^{-kt})$.

b Find x when $t = \frac{\ln 4}{k}$.

Solution:

$$R(\downarrow) \quad F = ma$$

$$mg - mkv = ma$$

$$g - kv = \frac{dv}{dt}$$

Separating the variables

$$\int 1 \, dt = \int \frac{1}{g - kv} \, dv$$

$$t = A - \frac{1}{k} \ln(g - kv)$$

$$kt = kA - \ln(g - kv)$$

$$\ln(g - kv) = kA - kt$$

$$g - kv = e^{kA - kt} = Be^{-kt}, \quad \text{where } B = e^{kA}$$

$$kv = g - Be^{-kt}$$

When $t = 0, v = \frac{g}{2k}$

$$k \times \frac{g}{2k} = g - B \Rightarrow B = g - \frac{g}{2} = \frac{g}{2}$$

Hence

$$kv = g - \frac{g}{2} e^{-kt} = \frac{g}{2} (2 - e^{-kt})$$

$$v = \frac{g}{2k} (2 - e^{-kt}), \text{ as required}$$

b From part a

$$v = \frac{dx}{dt} = \frac{g}{2k}(2 - e^{-kt})$$

$$x = \int \frac{g}{2k}(2 - e^{-kt}) dt$$

$$= \frac{g}{2k} \left(2t + \frac{1}{k} e^{-kt} \right) + B$$

When $t = 0, x = 0$

$$0 = \frac{g}{2k^2} + B \Rightarrow B = -\frac{g}{2k^2}$$

Hence

$$x = \frac{g}{k}t + \frac{g}{2k^2}(e^{-kt} - 1)$$

$$\text{When } t = \frac{\ln 4}{k}$$

$$x = \frac{g}{k^2} \ln 4 + \frac{g}{2k^2}(e^{-k^2} - 1) = \frac{2g}{k^2} \ln 2 + \frac{g}{2k^2} \left(\frac{1}{4} - 1 \right)$$

$$= \frac{2g}{k^2} \ln 2 - \frac{3g}{8k^2}$$

$$= \frac{g}{8k^2}(16 \ln 2 - 3)$$

© Pearson Education Ltd 2009

Solutionbank M4

Edexcel AS and A Level Modular Mathematics

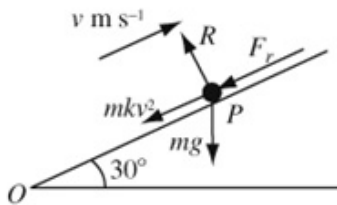
Resisted motion of a particle moving in a straight line

Exercise B, Question 8

Question:

A particle P of mass m is projected with speed U up a rough plane inclined at an angle 30° to the horizontal. The coefficient of friction between P and the plane is $\frac{\sqrt{3}}{4}$. The particle P is subject to an air resistance of magnitude mkv^2 , where v is the speed of P and k is a positive constant. Find the distance P moves before coming to rest.

Solution:



$$R(\nearrow) \quad R = mg \cos 30^\circ$$

Friction is limiting

$$F_r = \mu R = \frac{\sqrt{3}}{4} mg \cos 30^\circ = \frac{\sqrt{3}}{4} mg \times \frac{\sqrt{3}}{2} = \frac{3}{8} mg$$

$$R(\swarrow) \quad \mathbf{F} = m\mathbf{a}$$

$$-F_r - mg \sin 30^\circ - mkv^2 = ma$$

$$-\frac{3}{8}mg - \frac{1}{2}mg - mkv^2 = mv \frac{dv}{dx}$$

Dividing throughout by m and multiplying throughout by 8

$$-7g - 8kv^2 = 8v \frac{dv}{dx}$$

Separating the variables

$$\int 1 \, dx = - \int \frac{8v}{7g + 8kv^2} \, dv$$

$$x = A - \frac{1}{2k} \ln(7g + 8kv^2)$$

At $x = 0, v = U$

$$0 = A - \frac{1}{2k} \ln(7g + 8kU^2) \Rightarrow A = \frac{1}{2k} \ln(7g + 8kU^2)$$

Hence

$$\begin{aligned} x &= \frac{1}{2k} \ln(7g + 8kU^2) - \frac{1}{2k} \ln(7g + 8kv^2) \\ &= \frac{1}{2k} \ln \left(\frac{7g + 8kU^2}{7g + 8kv^2} \right) \end{aligned}$$

When $v = 0$

$$x = \frac{1}{2k} \ln \left(\frac{7g + 8kU^2}{7g} \right) = \frac{1}{2k} \ln \left(1 + \frac{8kU^2}{7g} \right)$$

The distance P moves before coming to rest is $\frac{1}{2k} \ln \left(1 + \frac{8kU^2}{7g} \right)$.

Solutionbank M4

Edexcel AS and A Level Modular Mathematics

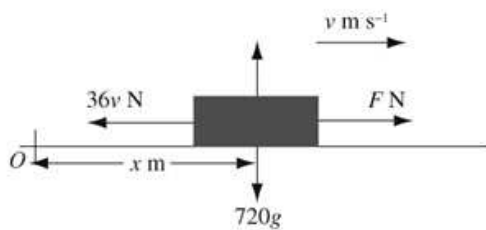
Resisted motion of a particle moving in a straight line

Exercise C, Question 1

Question:

A car of mass 720 kg is moving along a straight horizontal road with the engine of the car working at 30 kW. At time $t = 0$, the car passes a point A moving with speed 12 m s^{-1} . The total resistance to the motion of the car is $36v \text{ N}$, where $v \text{ m s}^{-1}$ is the speed of the car at time t seconds. Find the time the car takes to double its speed.

Solution:



$$30 \text{ kW} = 30\,000 \text{ W}$$

Let the tractive force generated by the engine be $F \text{ N}$.

$$P = Fv$$

$$30\,000 = Fv \Rightarrow F = \frac{30\,000}{v}$$

$$R(\rightarrow) \quad F = ma$$

$$F - 36v = 720a$$

$$\frac{30\,000}{v} - 36v = 720 \frac{dv}{dt}$$

$$30\,000 - 36v^2 = 720v \frac{dv}{dt}$$

Separating the variables

$$\int 1 \, dt = \int \frac{720v}{30\,000 - 36v^2} \, dv$$

$$t = A - 10 \ln(30\,000 - 36v^2)$$

When $t = 0, v = 12$

$$0 = A - 10 \ln(30\,000 - 36 \times 12^2) \Rightarrow A = 10 \ln 24\,816$$

Hence

$$t = 10 \ln 24\,816 - 10 \ln(30\,000 - 36v^2) = 10 \ln \left(\frac{24\,816}{30\,000 - 36v^2} \right)$$

When $v = 24$

$$t = 10 \ln \left(\frac{24\,816}{30\,000 - 36 \times 24^2} \right) = 10 \ln \left(\frac{24\,816}{9\,264} \right) \approx 9.85$$

The time the car takes to double its speed is 9.85 s (3 s.f.)

Solutionbank M4

Edexcel AS and A Level Modular Mathematics

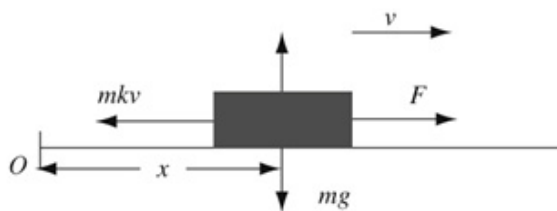
Resisted motion of a particle moving in a straight line

Exercise C, Question 2

Question:

A train of mass m is moving along a straight horizontal track with its engine working at a constant rate of $16mkU^2$, where k and U are constants. The resistance to the motion of the train has magnitude mkv , where v is the speed of the train. Find the time the train takes to increase its speed from U to $3U$.

Solution:



Let the tractive force generated by the engine be F .

$$P = Fv$$

$$16mkU^2 = Fv$$

$$F = \frac{16mkU^2}{v}$$

$$R(\rightarrow) \quad \mathbf{F} = m\mathbf{a}$$

$$\frac{16mkU^2}{v} - mkv = ma$$

$$\frac{16kU^2}{v} - kv = \frac{dv}{dt}$$

$$k(16U^2 - v^2) = v \frac{dv}{dt}$$

Separating the variables

$$\int k \, dt = \int \frac{v}{16U^2 - v^2} \, dv$$

$$kt = A - \frac{1}{2} \ln(16U^2 - v^2)$$

Let $t = 0$ when $v = U$

$$0 = A - \frac{1}{2} \ln(16U^2 - U^2) \Rightarrow A = \frac{1}{2} \ln(15U^2)$$

Hence

$$kt = \frac{1}{2} \ln(15U^2) - \frac{1}{2} \ln(16U^2 - v^2)$$

$$t = \frac{1}{2k} \ln \left(\frac{15U^2}{16U^2 - v^2} \right)$$

When $v = 3U$

$$t = \frac{1}{2k} \ln \left(\frac{15U^2}{16U^2 - 9U^2} \right) = \frac{1}{2k} \ln \left(\frac{15}{7} \right)$$

The time the train takes to increase its speed from U to $3U$ is $\frac{1}{2k} \ln \left(\frac{15}{7} \right)$.

Solutionbank M4

Edexcel AS and A Level Modular Mathematics

Resisted motion of a particle moving in a straight line

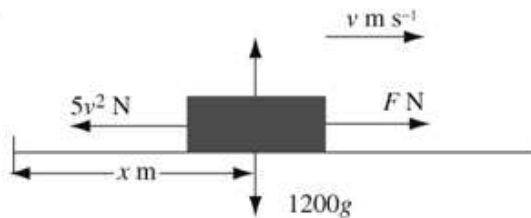
Exercise C, Question 3

Question:

A van of mass 1200 kg is moving along a horizontal road with its engine working at a constant rate of 40 kW. The resistance to motion of the van is of magnitude of $5v^2$ N, where $v \text{ m s}^{-1}$ is the speed of the van. Find

- a** the terminal speed of the van,
- b** the distance the van travels while increasing its speed from 10 m s^{-1} to 15 m s^{-1} .

Solution:

a

$$40 \text{ kW} = 40\,000 \text{ W}$$

Let the tractive force generated by the engine be $F \text{ N}$.

$$P = Fv$$

$$40\,000 = Fv \Rightarrow F = \frac{40\,000}{v}$$

$$\text{R}(\rightarrow) \quad \mathbf{F} = ma$$

$$\frac{40\,000}{v} - 5v^2 = 1200a \quad *$$

At the terminal speed $a = 0$

$$\frac{40\,000}{v} - 5v^2 = 0 \Rightarrow v^3 = 8000 \Rightarrow v = 20$$

The terminal speed of the van is 20 m s^{-1} .

b Equation * can be written

$$\frac{40\,000}{v} - 5v^2 = 1200v \frac{dv}{dx}$$

Dividing throughout by 5 and multiplying throughout by v

$$8000 - v^3 = 240v^2 \frac{dv}{dx}$$

Separating the variables

$$\int 1 \, dx = 240 \int \frac{v^2}{8000 - v^3} \, dv$$

$$x = A - \frac{240}{3} \ln(8000 - v^3)$$

Let $x = 0$ when $v = 10$

$$0 = A - 80 \ln(8000 - 1000) \Rightarrow A = 80 \ln 7000$$

Hence

$$x = 80 \ln 7000 - 80 \ln(8000 - v^3) = 80 \ln \left(\frac{7000}{8000 - v^3} \right)$$

When $v = 15$

$$x = 80 \ln \left(\frac{7000}{8000 - 15^3} \right) = 80 \ln \left(\frac{7000}{4625} \right) \approx 33.2$$

The distance the van travels while increasing its speed from 10 m s^{-1} to 15 m s^{-1} is 33.2 m (3 s.f.)

Solutionbank M4

Edexcel AS and A Level Modular Mathematics

Resisted motion of a particle moving in a straight line

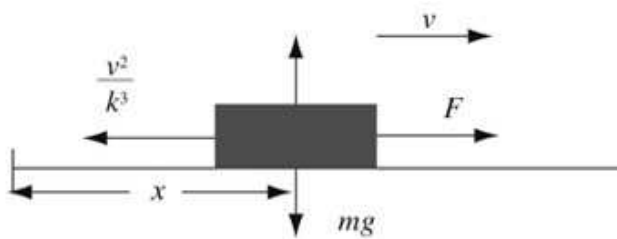
Exercise C, Question 4

Question:

A car of mass m is moving along a straight horizontal road with its engine working at a constant rate D^3 . The resistance to the motion of the car is of magnitude $\frac{v^2}{k^3}$, where v is the speed of the car and k is a positive constant.

Find the distance travelled by the car as its speed increases from $\frac{kD}{4}$ to $\frac{kD}{2}$.

Solution:



Let the tractive force generated by the engine be F .

$$P = Fv$$

$$D^3 = Fv \Rightarrow F = \frac{D^3}{v}$$

$$R(\rightarrow) \quad F = ma$$

$$\frac{D^3}{v} - \frac{v^2}{k^3} = mv \frac{dv}{dx}$$

Multiplying throughout by k^3v

$$k^3 D^3 - v^3 = mk^3 v^2 \frac{dv}{dx}$$

Separating the variables

$$\int 1 \, dx = mk^3 \int \frac{v^2}{k^3 D^3 - v^3} \, dv$$

$$x = A - \frac{mk^3}{3} \ln(k^3 D^3 - v^3)$$

$$\text{Let } x = 0 \text{ when } v = \frac{kD}{4}$$

$$0 = A - \frac{mk^3}{3} \ln \left(k^3 D^3 - \frac{k^3 D^3}{64} \right) \Rightarrow A = \frac{mk^3}{3} \ln \left(\frac{63k^3 D^3}{64} \right)$$

Hence

$$x = \frac{mk^3}{3} \left(\ln \left(\frac{63k^3 D^3}{64} \right) - \ln(k^3 D^3 - v^3) \right)$$

$$\text{When } v = \frac{kD}{2}$$

$$\begin{aligned} x &= \frac{mk^3}{3} \left(\ln \left(\frac{63k^3 D^3}{64} \right) - \ln \left(k^3 D^3 - \frac{k^3 D^3}{8} \right) \right) \\ &= \frac{mk^3}{3} \left(\ln \left(\frac{63k^3 D^3}{64} \right) - \ln \left(\frac{7k^3 D^3}{8} \right) \right) \\ &= \frac{mk^3}{3} \ln \left(\frac{63k^3 D^3}{64} \times \frac{8}{7k^3 D^3} \right) = \frac{mk^3}{3} \ln \left(\frac{9}{8} \right) \end{aligned}$$

The distance travelled by the car as its speed increases from $\frac{kD}{4}$ to $\frac{kD}{2}$ is

$$\frac{mk^3}{3} \ln \left(\frac{9}{8} \right)$$

Solutionbank M4

Edexcel AS and A Level Modular Mathematics

Resisted motion of a particle moving in a straight line

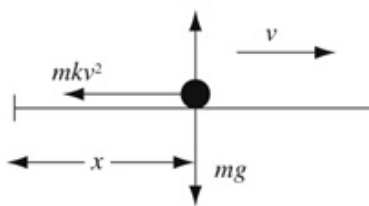
Exercise D, Question 1

Question:

A particle of mass m moves in a straight line on a smooth horizontal plane in a medium which exerts a resistance of magnitude mkv^2 , where v is the speed of the particle and k is a positive constant. At time $t = 0$ the particle has speed U .

Find, in terms of k and U , the time at which the particle's speed is $\frac{3}{4}U$. [E]

Solution:



$$R(\rightarrow) \quad F = ma$$

$$-mkv^2 = ma$$

$$-kv^2 = \frac{dv}{dt}$$

Separating the variables

$$\int k \, dt = - \int v^{-2} \, dv$$

$$kt = -\frac{v^{-1}}{-1} + A = \frac{1}{v} + A$$

At $t = 0, v = U$

$$0 = \frac{1}{U} + A \Rightarrow A = -\frac{1}{U}$$

Hence

$$t = \frac{1}{k} \left(\frac{1}{v} - \frac{1}{U} \right)$$

When $v = \frac{3}{4}U$

$$t = \frac{1}{k} \left(\frac{1}{\frac{3}{4}U} - \frac{1}{U} \right) = \frac{1}{k} \left(\frac{4}{3U} - \frac{1}{U} \right) = \frac{1}{3kU}$$

The time at which the particle's speed is $\frac{3}{4}U$ is $\frac{1}{3kU}$.

Solutionbank M4

Edexcel AS and A Level Modular Mathematics

Resisted motion of a particle moving in a straight line

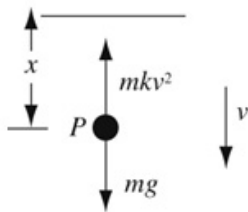
Exercise D, Question 2

Question:

A small pebble of mass m is placed in a viscous liquid and sinks vertically from rest through the liquid. When the speed of the particle is v the magnitude of the resistance due to the liquid is modelled as mkv^2 , where k is a positive constant.

Find the speed of the pebble after it has fallen a distance D through the liquid. [E]

Solution:



$$R(\downarrow) \quad F = ma$$

$$mg - mkv^2 = ma$$

$$g - kv^2 = v \frac{dv}{dx}$$

Separating the variables

$$\int 1 \, dx = \int \frac{v}{g - kv^2} \, dv$$

$$x = A - \frac{1}{2k} \ln(g - kv^2)$$

When $x = 0, v = 0$

$$0 = A - \frac{1}{2k} \ln g \Rightarrow A = \frac{1}{2k} \ln g$$

$$x = \frac{1}{2k} \ln g - \frac{1}{2k} \ln(g - kv^2) = \frac{1}{2k} \ln \left(\frac{g}{g - kv^2} \right)$$

$$\ln \left(\frac{g}{g - kv^2} \right) = 2kx$$

$$\frac{g}{g - kv^2} = e^{2kx}$$

$$g - kv^2 = g e^{-2kx}$$

$$v^2 = \frac{g}{k} (1 - e^{-2kx})$$

When $x = D$

$$v^2 = \frac{g}{k} (1 - e^{-2kD})$$

$$v = \left(\frac{g}{k} \right)^{\frac{1}{2}} (1 - e^{-2kD})^{\frac{1}{2}}$$

Solutionbank M4

Edexcel AS and A Level Modular Mathematics

Resisted motion of a particle moving in a straight line

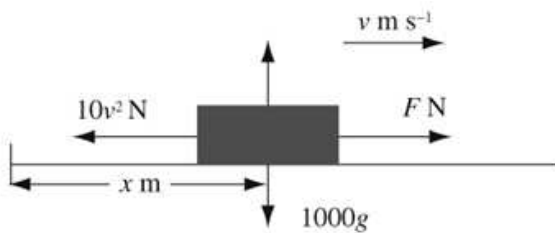
Exercise D, Question 3

Question:

A car of mass 1000 kg is driven by an engine which generates a constant power of 12 kW. The only resistance to the car's motion is air resistance of magnitude $10v^2$ N, where $v \text{ m s}^{-1}$ is the speed of the car.

Find the distance travelled as the car's speed increases from 5 m s^{-1} to 10 m s^{-1} . [E]

Solution:



$$12 \text{ kW} = 12\,000 \text{ W}$$

$$P = Fv$$

$$F = \frac{12\,000}{v}$$

$$\text{R}(\rightarrow) \quad F = ma$$

$$F - 10v^2 = 1000a$$

$$\frac{12\,000}{v} - 10v^2 = 1000v \frac{dv}{dx}$$

Dividing throughout by 10 and multiplying throughout by v

$$1200 - v^3 = 100v^2 \frac{dv}{dx}$$

Separating the variables

$$\int 1 \, dx = 100 \int \frac{v^2}{1200 - v^3} \, dv$$

$$x = A - \frac{100}{3} \ln(1200 - v^3)$$

Let $x = 0$ when $v = 5$

$$0 = A - \frac{100}{3} \ln(1200 - 125) \Rightarrow A = \frac{100}{3} \ln 1075$$

Hence

$$x = \frac{100}{3} \ln 1075 - \frac{100}{3} \ln(1200 - v^3) = \frac{100}{3} \ln \left(\frac{1075}{1200 - v^3} \right)$$

When $v = 10$

$$x = \frac{100}{3} \ln \left(\frac{1075}{1200 - 10^3} \right) = \frac{100}{3} \ln \left(\frac{1075}{200} \right) \approx 56.1$$

The distance travelled as the car's speed increases from 5 m s^{-1} to 10 m s^{-1} is 56.1 m (3 s.f.).

Solutionbank M4

Edexcel AS and A Level Modular Mathematics

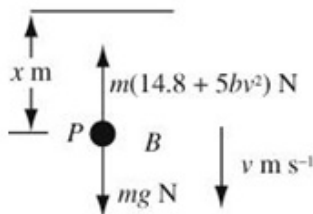
Resisted motion of a particle moving in a straight line

Exercise D, Question 4

Question:

A bullet B , of mass m kg, is fired vertically downwards into a block of wood W which is fixed in the ground. The bullet enters W with speed U m s⁻¹ and W offers a resistance of magnitude $m(14.8 + 5bv^2)$ N, where v m s⁻¹ is the speed of B and b is a positive constant. The path of B in W remains vertical until B comes to rest after travelling a distance d metres into W . Find d in terms of b and U . [E]

Solution:



$$R(\downarrow) \quad F = ma$$

$$mg - m(14.8 + 5bv^2) = ma$$

$$9.8 - 14.8 - 5bv^2 = v \frac{dv}{dx}$$

$$-5(1 + bv^2) = v \frac{dv}{dx}$$

Separating the variables

$$\int 1 \, dx = -\frac{1}{5} \int \frac{v}{1 + bv^2} \, dv$$

$$x = A - \frac{1}{10b} \ln(1 + bv^2)$$

At $x = 0, v = U$

$$0 = A - \frac{1}{10b} \ln(1 + bU^2) \Rightarrow A = \frac{1}{10b} \ln(1 + bU^2)$$

$$x = \frac{1}{10b} \ln(1 + bU^2) - \frac{1}{10b} \ln(1 + bv^2) = \frac{1}{10b} \ln \left(\frac{1 + bU^2}{1 + bv^2} \right)$$

When $v = 0, x = d$

$$d = \frac{1}{10b} \ln(1 + bU^2)$$

Solutionbank M4

Edexcel AS and A Level Modular Mathematics

Resisted motion of a particle moving in a straight line

Exercise D, Question 5

Question:

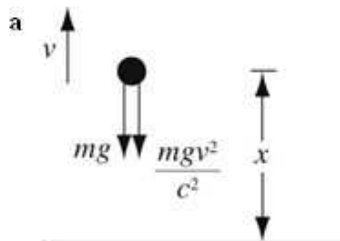
A particle of mass m is projected vertically upwards, with speed V , in a medium which exerts a resisting force of magnitude $\frac{mgv^2}{c^2}$, where v is the speed of the particle and c is a positive constant.

a Show that the greatest height attained above the point of projection is

$$\frac{c^2}{2g} \ln \left(1 + \frac{V^2}{c^2} \right).$$

b Find an expression, in terms of V , c and g , for the time to reach this height. [E]

Solution:



$$R(\uparrow) \quad F = ma$$

$$-mg - \frac{mgv^2}{c^2} = ma$$

$$-g \left(\frac{c^2 + v^2}{c^2} \right) = v \frac{dv}{dx}$$

$$\int g \, dx = -c^2 \int \frac{v}{c^2 + v^2} \, dv$$

$$gx = A - \frac{c^2}{2} \ln(c^2 + v^2)$$

$$\text{At } x = 0, v = V$$

$$0 = A - \frac{c^2}{2} \ln(c^2 + V^2) \Rightarrow A = \frac{c^2}{2} \ln(c^2 + V^2)$$

Hence

$$gx = \frac{c^2}{2} \ln(c^2 + V^2) - \frac{c^2}{2} \ln(c^2 + v^2) = \frac{c^2}{2} \ln \left(\frac{c^2 + V^2}{c^2 + v^2} \right)$$

$$x = \frac{c^2}{2g} \ln \left(\frac{c^2 + V^2}{c^2 + v^2} \right)$$

At the greatest height $v = 0$

$$x = \frac{c^2}{2g} \ln \left(\frac{c^2 + V^2}{c^2} \right) = \frac{c^2}{2g} \ln \left(1 + \frac{V^2}{c^2} \right), \text{ as required.}$$

b $R(\uparrow) \quad \mathbf{F} = m\mathbf{a}$

$$-mg - \frac{mgv^2}{c^2} = ma$$

$$-g \left(\frac{c^2 + v^2}{c^2} \right) = \frac{dv}{dt}$$

Separating the variables

$$\frac{g}{c^2} \int 1 \, dt = - \int \frac{1}{c^2 + v^2} \, dv$$

$$\frac{gt}{c^2} = A - \frac{1}{c} \arctan \left(\frac{v}{c} \right)$$

When $t = 0, v = V$

$$0 = A - \frac{1}{c} \arctan \left(\frac{V}{c} \right) \Rightarrow A = \frac{1}{c} \arctan \left(\frac{V}{c} \right)$$

Hence

$$\frac{gt}{c^2} = \frac{1}{c} \arctan \left(\frac{V}{c} \right) - \frac{1}{c} \arctan \left(\frac{v}{c} \right)$$

At the greatest height $v = 0$

$$\frac{gt}{c^2} = \frac{1}{c} \arctan \left(\frac{V}{c} \right) \Rightarrow t = \frac{c}{g} \arctan \left(\frac{V}{c} \right)$$

The time taken to reach the greatest height is $\frac{c}{g} \arctan \left(\frac{V}{c} \right)$.

Solutionbank M4

Edexcel AS and A Level Modular Mathematics

Resisted motion of a particle moving in a straight line

Exercise D, Question 6

Question:

A particle is projected vertically upwards with speed U in a medium in which the resistance is proportional to the square of the speed. Given that U is also the speed for which the resistance offered by the medium is equal to the weight of the particle show that

a the time of ascent is $\frac{\pi U}{4g}$,

b the distance ascended is $\frac{U^2}{2g} \ln 2$. [E]

Solution:

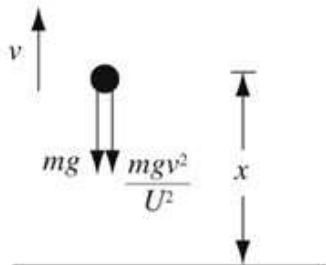
- a Let the mass of the particle be m .

Let the resistance be $k v^2$, where k is a constant of proportionality.

If U is the speed for which the resistance is equal to the weight of the particle then

$$kU^2 = mg \Rightarrow k = \frac{mg}{U^2}$$

Hence the resistance is $\frac{mgv^2}{U^2}$.



$$R(\uparrow) \quad \mathbf{F} = m\mathbf{a}$$

$$-mg - \frac{mgv^2}{U^2} = ma$$

$$-\frac{g(U^2 + v^2)}{U^2} = \frac{dv}{dt} \quad *$$

Separating the variables

$$\int g \, dt = -U^2 \int \frac{1}{U^2 + v^2} \, dv$$

$$gt = A - U^2 \times \frac{1}{U} \arctan\left(\frac{v}{U}\right)$$

When $t = 0, v = U$

$$0 = A - U \arctan 1 \Rightarrow A = U \arctan 1 = \frac{\pi U}{4}$$

Hence

$$gt = \frac{\pi U}{4} - U \arctan\left(\frac{v}{U}\right)$$

$$t = \frac{\pi U}{4g} - \frac{U}{g} \arctan\left(\frac{v}{U}\right)$$

Let the time of ascent be T .

When $t = T, v = 0$

$$T = \frac{\pi U}{4g} - \frac{U}{g} \arctan 0$$

$$= \frac{\pi U}{4g}, \text{ as required}$$

b Equation * in part **a** can be written as

$$-\frac{g(U^2 + v^2)}{U^2} = v \frac{dv}{dx}$$

Separating the variables

Equation * in part **a** can be written as

$$-\frac{g(U^2 + v^2)}{U^2} = v \frac{dv}{dx}$$

Separating the variables

$$\int g \, dx = -U^2 \int \frac{v}{U^2 + v^2} \, dv$$

$$gx = B - \frac{U^2}{2} \ln(U^2 + v^2)$$

When $x = 0, v = U$

$$0 = B - \frac{U^2}{2} \ln(2U^2) \Rightarrow B = \frac{U^2}{2} \ln(2U^2)$$

Hence

$$gx = \frac{U^2}{2} \ln(2U^2) - \frac{U^2}{2} \ln(U^2 + v^2)$$

$$x = \frac{U^2}{2g} \ln \left(\frac{2U^2}{U^2 + v^2} \right)$$

Let the total distance ascended be H .

When $h = H, v = 0$

$$H = \frac{U^2}{2g} \ln \left(\frac{2U^2}{U^2} \right) = \frac{U^2}{2g} \ln 2, \text{ as required}$$

Solutionbank M4

Edexcel AS and A Level Modular Mathematics

Resisted motion of a particle moving in a straight line

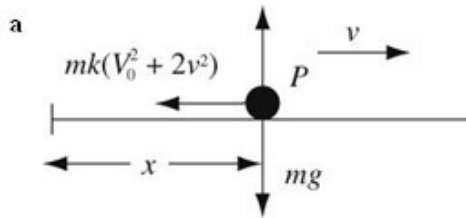
Exercise D, Question 7

Question:

At time t , a particle P , of mass m , moving in a straight line has speed v . The only force acting is a resistance of magnitude $mk(V_0^2 + 2v^2)$, where k is a positive constant and V_0 is the speed of P when $t = 0$.

- a Show that, as v reduces from V_0 to $\frac{1}{2}V_0$, P travels a distance $\frac{\ln 2}{4k}$.
- b Express the time P takes to cover this distance in the form $\frac{\lambda}{kV_0}$, giving the value of λ to two decimal places. [E]

Solution:



$$R(\rightarrow) \quad F = ma$$

$$-mk(V_0^2 + 2v^2) = ma$$

$$-k(V_0^2 + 2v^2) = v \frac{dv}{dx} \quad *$$

Separating the variables

$$\int k \, dx = - \int \frac{v}{V_0^2 + 2v^2} \, dv$$

$$kx = A - \frac{1}{4} \ln(V_0^2 + 2v^2)$$

At $x = 0, v = V_0$

$$0 = A - \frac{1}{4} \ln(V_0^2 + 2V_0^2) \Rightarrow A = \frac{1}{4} \ln(3V_0^2)$$

Hence

$$kx = \frac{1}{4} \ln(3V_0^2) - \frac{1}{4} \ln(V_0^2 + 2v^2)$$

$$x = \frac{1}{4k} \ln \left(\frac{3V_0^2}{V_0^2 + 2v^2} \right)$$

When $v = \frac{1}{2}V_0$

$$x = \frac{1}{4k} \ln \left(\frac{3V_0^2}{V_0^2 + \frac{1}{2}V_0^2} \right) = \frac{1}{4k} \ln \left(\frac{3V_0^2}{\frac{3}{2}V_0^2} \right)$$

$$= \frac{\ln 2}{4k}, \text{ as required}$$

b Equation * can be written as

$$-k(V_0^2 + 2v^2) = \frac{dv}{dt}$$

Separating the variables

$$\int k \, dt = - \int \frac{1}{V_0^2 + 2v^2} \, dv = - \frac{1}{2} \int \frac{1}{\left(\frac{V_0}{\sqrt{2}}\right)^2 + v^2} \, dv$$

$$kt = B - \frac{1}{2} \times \frac{1}{\left(\frac{V_0}{\sqrt{2}}\right)} \arctan \frac{v}{\left(\frac{V_0}{\sqrt{2}}\right)}$$

When $t = 0, v = V_0$

$$0 = B - \frac{\sqrt{2}}{2V_0} \arctan \left(\frac{\sqrt{2}V_0}{V_0} \right) \Rightarrow B = \frac{\sqrt{2}}{2V_0} \arctan \sqrt{2}$$

Hence

$$t = \frac{\sqrt{2}}{2kV_0} \left(\arctan \sqrt{2} - \arctan \left(\frac{\sqrt{2}v}{V_0} \right) \right)$$

$$v = \frac{1}{2}V_0$$

$$\begin{aligned} t &= \frac{\sqrt{2}}{2kV_0} \left(\arctan \sqrt{2} - \arctan \left(\frac{\sqrt{2} \times \frac{1}{2}V_0}{V_0} \right) \right) \\ &= \frac{1}{kV_0} \left[\frac{\sqrt{2}}{2} \left(\arctan \sqrt{2} - \arctan \left(\frac{\sqrt{2}}{2} \right) \right) \right] \end{aligned}$$

This has the form $\frac{\lambda}{kV_0}$, as required, where

$$\lambda = \frac{\sqrt{2}}{2} \left(\arctan \sqrt{2} - \arctan \left(\frac{\sqrt{2}}{2} \right) \right) \approx 0.24 \text{ (2 d.p.)}$$

Solutionbank M4

Edexcel AS and A Level Modular Mathematics

Resisted motion of a particle moving in a straight line

Exercise D, Question 8

Question:

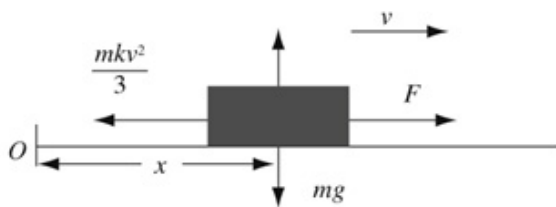
A car of mass m is moving along a straight horizontal road. When displacement of the car from a fixed point O is x , its speed is v . The resistance to the motion of the car has magnitude $\frac{mkv^2}{3}$, where k is a positive constant. The engine of the car is working at a constant rate P .

a Show that $3mv^2 \frac{dv}{dx} = 3P - mkv^3$.

When $t = 0$, the speed of the car is half of its limiting speed.

b Find x in terms of m , k , P and v .

Solution:



a $P = Fv \Rightarrow F = \frac{P}{v}$

$R(\rightarrow) \quad \mathbf{F} = m\mathbf{a}$

$$F - \frac{mkv^2}{3} = ma$$

$$\frac{P}{v} - \frac{mkv^2}{3} = mv \frac{dv}{dx}$$

Multiplying throughout by $3v$

$$3P - mkv^3 = 3mv^2 \frac{dv}{dx}$$

$$3mv^2 \frac{dv}{dx} = 3P - mkv^3, \text{ as required}$$

b The limiting speed is given by $a = v \frac{dv}{dx} = 0$

$$0 = 3P - mkv^3 \Rightarrow v^3 = \frac{3P}{mk} \Rightarrow v = \left(\frac{3P}{mk} \right)^{\frac{1}{3}}$$

Separating the variables in the answer to part a

$$\int 1 \, dx = \int \frac{3mv^2}{3P - mkv^3} \, dv$$

$$x = A - \frac{1}{k} \ln(3P - mkv^3)$$

When $x = 0$, $v = \frac{1}{2} \left(\frac{3P}{mk} \right)^{\frac{1}{3}} \Rightarrow v^3 = \frac{3P}{8mk}$

$$0 = A - \frac{1}{k} \ln \left(3P - \frac{3P}{8} \right) \Rightarrow A = \frac{1}{k} \ln \left(\frac{21P}{8} \right)$$

Hence

$$x = \frac{1}{k} \ln \left(\frac{21P}{8} \right) - \frac{1}{k} \ln(3P - mkv^3)$$

$$= \frac{1}{k} \ln \left(\frac{21P}{8(3P - mkv^3)} \right)$$